

**SSC  
GD**

**Previous Year Paper  
25 Nov 2021 Shift 1**



सत्यमेव जयते

Exam Date	25/11/2021
Exam Time :	9:00 AM - 10:30 AM
Subject	Constable GD 2021

Section : Part A General Intelligence and Reasoning

**Q.1** Four letter-clusters have been given, out of which three are alike in some manner and one is different. Select the letter-cluster that is different.

- Ans  1. NPLR  
 2. YAWD  
 3. SUQW  
 4. PRNT

Question ID : 65497832546  
Status : Answered  
Chosen Option : 2

**Q.2** Presently Suman is four times as old as her son. Five years ago, she was seven times as old as her son. What is the age of her son?

- Ans  1. 11 years  
 2. 10 years  
 3. 16 years  
 4. 12 years

Question ID : 65497832540  
Status : Answered  
Chosen Option : 2

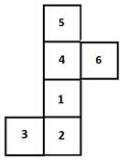
**Q.3** Select the set of classes the relationship among which is best illustrated by the given Venn diagram.



- Ans  1. Mercury, Planets, Venus  
 2. Businessmen, Scientists, Singers  
 3. Spinach, Vegetables, Peach  
 4. Women, Swimmers, Men

Question ID : 65497832545  
Status : Answered  
Chosen Option : 4

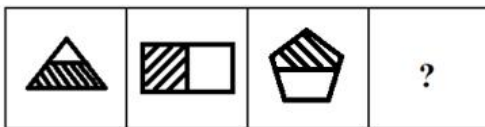
**Q.4** A cube is made by folding the given sheet. In the cube so formed, select the number that will be on the face opposite the face showing the number '4'.



- Ans**
- ✓ 1. 2
  - ✗ 2. 3
  - ✗ 3. 6
  - ✗ 4. 5

Question ID : 65497832552  
Status : Answered  
Chosen Option : 1

**Q.5** Select the figure that will replace the question mark (?) in the following figure series:



- Ans**
- ✓ 1.
  - ✗ 2.
  - ✗ 3.
  - ✗ 4.

Question ID : 65497832536  
Status : Answered  
Chosen Option : 1

**Q.6** Select the correct option that indicates the arrangement of the given words in the order in which they appear in an English dictionary.

1. Nervous
2. Nobility
3. Nebulizer
4. Nominate
5. Nitrogen

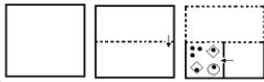
- Ans
- 1. 3, 4, 2, 5, 1
  - 2. 3, 1, 5, 2, 4
  - 3. 3, 5, 1, 2, 4
  - 4. 3, 1, 2, 5, 4

Question ID : 65497832533

Status : Answered

Chosen Option : 2

**Q.7** The sequence of folding a piece of paper and the manner in which the folded paper has been cut is shown in the following figures. How would this paper look when unfolded?



Ans

- 1.
- 2.
- 3.
- 4.

Question ID : 65497832541

Status : Answered

Chosen Option : 3

**Q.8** In a certain code language, 'FALSE' is coded as '2141588'. How will 'CHOICE' be coded in that language?

- Ans
- 1. 24191812248
  - 2. 6181921288
  - 3. 24181924128
  - 4. 6191812822

Question ID : 65497832547

Status : Not Answered

Chosen Option : --

**Q.9** Select the number from among the given options that can replace the question mark (?) in the following series.

1, 8, 81, ?, 15625

Ans  1. 1015

2. 1225

3. 1227

4. 1024

Question ID : 65497832535

Status : Answered

Chosen Option : 4

**Q.10** Select the option that is related to the third letter-cluster in the same way as the second letter-cluster is related to the first letter-cluster.

CNK : JUR :: FJL : ?

Ans  1. NPR

2. MQS

3. OSU

4. KOQ

Question ID : 65497832530

Status : Answered

Chosen Option : 2

**Q.11** Select the number from among the given options that can replace the question mark (?) in the following series.

2, 10, 30, ?, 130

Ans  1. 68

2. 65

3. 70

4. 75

Question ID : 65497832549

Status : Answered

Chosen Option : 1

**Q.12** If 'A' denotes 'addition', 'B' denotes 'multiplication', 'C' denotes 'subtraction', and 'D' denotes 'division', then what will be the value of the following expression?

483 D 23 A 93 C 16 B 4C (15 B 2)

Ans  1. 30

2. 78

3. 20

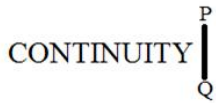
4. 55

Question ID : 65497832551

Status : Answered

Chosen Option : 3

**Q.13** Select the correct mirror image of the given combination when the mirror is placed at PQ as shown.



- Ans
- 1.
  - 2.
  - 3.
  - 4.

Question ID : 65497832554  
 Status : Answered  
 Chosen Option : 2

**Q.14** Read the given statements and conclusions carefully. Assuming that the information given in the statements is true, even if it appears to be at variance with commonly known facts, decide which of the given conclusions logically follow(s) from the statements.

**Statements:**  
 All pens are pencils.  
 Some markers are pencils.

**Conclusions:**  
 I. All pens are markers.  
 II. Some pens are markers.

- Ans
- 1. Only conclusion II follows
  - 2. None of the conclusions follow
  - 3. Only conclusion I follows
  - 4. Both the conclusions follow

Question ID : 65497832538  
 Status : Answered  
 Chosen Option : 2

**Q.15** Select the option in which the given figure is embedded (rotation is NOT allowed).



- Ans
- 1.
  - 2.
  - 3.
  - 4.

Question ID : 65497832553  
 Status : Answered  
 Chosen Option : 1

Q.16 In a certain code language, 'LUCKNOW' is written as 'CULKWON' and 'UDAIPUR' is written as 'ADUIRUP'. How will 'GWALIOR' be written in that language?

- Ans
- 1. WGLARO
  - 2. AGWLRIO
  - 3. AWGROIL
  - 4. AWGLROI

Question ID : 65497832531  
Status : Answered  
Chosen Option : 4

Q.17 Select the letter-cluster from among the given options that can replace the question mark (?) in the following series.

EIM, QUY, CGK, ?

- Ans
- 1. DHL
  - 2. LPT
  - 3. SWA
  - 4. OSW

Question ID : 65497832542  
Status : Answered  
Chosen Option : 4

Q.18 Study the given pattern carefully and select the number that can replace the question mark (?) in it.

34 18 43

47 ? 28

71 33 61

- Ans
- 1. 42
  - 2. 25
  - 3. 35
  - 4. 19

Question ID : 65497832539  
Status : Answered  
Chosen Option : 2

Q.19 Select the option that is related to the third number in the same way as the second number is related to the first number and the sixth number is related to the fifth number.

11 : 77 :: 12 : ? :: 14 : 119

- Ans
- 1. 90
  - 2. 97
  - 3. 83
  - 4. 79

Question ID : 65497832550  
Status : Answered  
Chosen Option : 1

**Q.20** Nisha, who is Dileep's daughter, says to Deveshi, "Your mother Ritu is the younger sister of my father, who is the second child of Krishna". How is Krishna related to Deveshi?

- Ans**
- 1. Paternal grandfather
  - 2. Father-in-law
  - 3. Father
  - 4. Maternal grandfather

Question ID : 65497832532

Status : Answered

Chosen Option : 4

**Q.21** Seven doctors, S, T, U, V, X, Y and Z, are sitting around a round table, facing towards the centre, for a case study. Y is sitting third to the right of Z and between S and X. Z is sitting second to the right of U. V is sitting third to the left of X. Two doctors are sitting between Y and V. Based on the given information, which of the following statements is correct?

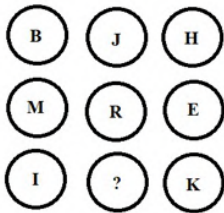
- Ans**
- 1. Z is sitting between T and X.
  - 2. S is sitting fourth to the left of T.
  - 3. U is sitting to the immediate right of V.
  - 4. Four doctors are sitting between Y and Z.

Question ID : 65497832548

Status : Answered

Chosen Option : 2

**Q.22** Study the given pattern carefully and select the letter that can replace the question mark (?) in it.



- Ans**
- 1. T
  - 2. V
  - 3. U
  - 4. S

Question ID : 65497832534

Status : Answered

Chosen Option : 1

**Q.23** M, N, L, O, Q and H are sitting in a row. Q and H are in the centre. M and N are at the ends. L is sitting to the left of N. Who is to the right of M?

- Ans**
- 1. N
  - 2. O
  - 3. L
  - 4. Q

Question ID : 65497832544

Status : Answered

Chosen Option : 2



**Q.24** In a certain code language, 'nuk me xil' means 'lit this light', 'ki me to' means 'the bright light', and 'nuk ki yun' means 'this is bright'. What will be the code for 'lit' in that language?

- Ans
- 1. nuk
  - 2. yun
  - 3. xil
  - 4. me

Question ID : 65497832537  
Status : Answered  
Chosen Option : 3

**Q.25** Cataract is related to 'Eye' in the same way as Meniere's disease is related to '\_\_\_\_\_'.  
'\_\_\_\_\_'

- Ans
- 1. Nose
  - 2. Mouth
  - 3. Teeth
  - 4. Ear

Question ID : 65497832543  
Status : Answered  
Chosen Option : 1

Section : Part B General Knowledge and General Awareness

**Q.1** The difference between the total revenue and total expenditure of the government is called \_\_\_\_\_.

- Ans
- 1. fiscal deficit
  - 2. budgetary deficit
  - 3. deflation
  - 4. primary deficit

Question ID : 65497832561  
Status : Answered  
Chosen Option : 4

**Q.2** Who among the following is NOT a hockey player?

- Ans
- 1. Ajit Singh
  - 2. Manu Bhaker
  - 3. Deepika Thakur
  - 4. Akashdeep Singh

Question ID : 65497832578  
Status : Answered  
Chosen Option : 2

**Q.3** In which macaronic language was a fourteenth-century text, the Lilatilakam, written?

- Ans
- 1. Rekhta
  - 2. Brāhmī
  - 3. Manipravalam
  - 4. Mozakhrif

Question ID : 65497832566  
Status : Answered  
Chosen Option : 3

**Q.4** According to the Public Affairs Index 2020, which among the following has been adjudged the best governed state in the country in the large states category?

- Ans  1. Kerala  
 2. Uttar Pradesh  
 3. Odisha  
 4. Rajasthan

Question ID : 65497832568  
Status : Answered  
Chosen Option : 1

**Q.5** Which of the following books is NOT authored by Shashi Tharoor?

- Ans  1. The Hindu Way: An Introduction to Hinduism (2019)  
 2. An Era of Darkness: The British Empire in India (2016)  
 3. Making India Awesome (2015)  
 4. The Paradoxical Prime Minister (2018)

Question ID : 65497832575  
Status : Answered  
Chosen Option : 3

**Q.6** The human eye is like a camera. Its lens system forms an image on a light sensitive screen called the \_\_\_\_\_.

- Ans  1. cornea  
 2. iris  
 3. retina  
 4. pupil

Question ID : 65497832572  
Status : Answered  
Chosen Option : 3

**Q.7** Which of the following is an example of primary activity of the economic sector of India?

- Ans  1. Forestry  
 2. Transport  
 3. Communication  
 4. Cloth weaving

Question ID : 65497832577  
Status : Answered  
Chosen Option : 1

**Q.8** Federalism is one of the key features of the Constitution of India, under which:

- Ans  1. The head of the government is also head of the state  
 2. states draw their authority from the Parliament  
 3. all persons in India are governed by laws and policies made by the Judiciary only  
 4. states are agents of the Federal government

Question ID : 65497832567  
Status : Answered  
Chosen Option : 4

**Q.9** In India, National Epilepsy Day 2020 was celebrated on:

- Ans**  1. 17 November  
 2. 28 November  
 3. 25 November  
 4. 1 November

Question ID : **65497832564**  
Status : **Answered**  
Chosen Option : **4**

**Q.10** \_\_\_\_\_ is the science that studies the structure of the body.

- Ans**  1. Anatomy  
 2. Cytology  
 3. Palynology  
 4. Palaeobotany

Question ID : **65497832562**  
Status : **Answered**  
Chosen Option : **1**

**Q.11** Who among the following was PETA India's Person of the year 2019?

- Ans**  1. Virat Kohli  
 2. Sonam Kapoor  
 3. Anushka Sharma  
 4. PV Sindhu

Question ID : **65497832574**  
Status : **Answered**  
Chosen Option : **3**

**Q.12** Which of the following countries will host the 2022 Asian Games?

- Ans**  1. Indonesia  
 2. China  
 3. Japan  
 4. South Korea

Question ID : **65497832576**  
Status : **Answered**  
Chosen Option : **4**

**Q.13** Anopheles is a \_\_\_\_\_ which carries the parasite of malaria.

- Ans**  1. female mosquito  
 2. housefly  
 3. male mosquito  
 4. spider

Question ID : **65497832571**  
Status : **Answered**  
Chosen Option : **1**

Q.14 Which of the following countries hosted the 13th BRICS Summit in 2021?

- Ans  1. India  
 2. China  
 3. Russia  
 4. Brazil

Question ID : 65497832560  
Status : Answered  
Chosen Option : 3

Q.15 The \_\_\_\_\_ is the final authority of making laws in any democratic country.

- Ans  1. Prime Minister  
 2. Parliament  
 3. Law Minister  
 4. President

Question ID : 65497832559  
Status : Answered  
Chosen Option : 2

Q.16 Kulik Bird Sanctuary is located in which of the following states?

- Ans  1. Andhra Pradesh  
 2. Maharashtra  
 3. Madhya Pradesh  
 4. West Bengal

Question ID : 65497832556  
Status : Answered  
Chosen Option : 1

Q.17 Holt Mackenzie and Robert Merttins Bird introduced:

- Ans  1. The Mahalwari System  
 2. The Ryotwari System  
 3. The Doctrine of Lapse  
 4. The Permanent Settlement

Question ID : 65497832563  
Status : Answered  
Chosen Option : 4

Q.18 During which of the following national movements in Bengal was a tricolour flag designed?

- Ans  1. Khilafat Movement  
 2. Civil Disobedience Movement  
 3. Swadeshi Movement  
 4. Quit India Movement

Question ID : 65497832558  
Status : Answered  
Chosen Option : 3

**Q.19** As of July 2021, the Ayushman Bharat Pradhan Mantri Jan Arogya Yojana (AB-PM-JAY) was NOT implemented in the state of \_\_\_\_\_.

- Ans
- 1. West Bengal
  - 2. Karnataka
  - 3. Punjab
  - 4. Gujarat

Question ID : 65497832579  
Status : Answered  
Chosen Option : 1

**Q.20** Which of the following festivals is celebrated during the Amavasya of the Kartik month?

- Ans
- 1. Govardhan puja
  - 2. Dhanteras
  - 3. Raksha Bandhan
  - 4. Diwali

Question ID : 65497832570  
Status : Answered  
Chosen Option : 4

**Q.21** When a good is produced by exploiting natural resources, it falls in the category of:

- Ans
- 1. mining industry
  - 2. service sector
  - 3. agriculture sector
  - 4. industrial sector

Question ID : 65497832565  
Status : Answered  
Chosen Option : 4

**Q.22** What is NOT a specific feature of commercial farming as against subsistence farming?

- Ans
- 1. It is mainly practiced in lesser developed countries
  - 2. Most of the work is done by machines
  - 3. The amount of capital used is large
  - 4. Crops are grown for sale in the market

Question ID : 65497832573  
Status : Answered  
Chosen Option : 1

**Q.23** How many times have Mumbai Indians won the IPL title till its 2020 edition?

- Ans
- 1. 4
  - 2. 2
  - 3. 3
  - 4. 5

Question ID : 65497832555  
Status : Answered  
Chosen Option : 1

**Q.24** The Bengal tiger was adopted as 'The national animal of India' in the year \_\_\_\_\_.

- Ans
- 1. 1978
  - 2. 1974
  - 3. 1976
  - 4. 1972

Question ID : 65497832569  
Status : Answered  
Chosen Option : 4

**Q.25** Who among the following was the last Mughal Emperor?

- Ans
- 1. Shah Jahan
  - 2. Aurangzeb
  - 3. Akbar
  - 4. Bahadur Shah II

Question ID : 65497832557  
Status : Answered  
Chosen Option : 4

Section : Part C Elementary Mathematics

**Q.1** P and Q can together finish a work in 21 days. They worked together for 12 days and Q left. After that, P finished the remaining work in 15 days. In how many days P alone can finish the work?

- Ans
- 1. 28 days
  - 2. 35 days
  - 3. 19 days
  - 4. 24 days

Question ID : 65497832594  
Status : Answered  
Chosen Option : 2

**Q.2** The average height of 23 boys is 1.2 m. When 3 boys leave the group, then the average height increases by 0.15 m. What is the average height of the 3 boys who leave?

- Ans
- 1. 0.5 m
  - 2. 0.2 m
  - 3. 0.45 m
  - 4. 0.6 m

Question ID : 65497832597  
Status : Answered  
Chosen Option : 2

**Q.3** A shopkeeper gives 10% discount on the cost of rice. A buyer could purchase 5 kg more rice for ₹720. Find the selling price of rice per kg.

- Ans**
- 1. ₹19
  - 2. ₹12
  - 3. ₹16
  - 4. ₹18

Question ID : 65497832598  
Status : Answered  
Chosen Option : 4

**Q.4** An express train travelled at an average speed of 120 km/h, stopping for 4 min after every 80 km. How long did it take to reach its destination at the distance of 720 km from the starting point?

- Ans**
- 1. 5 h 45 min
  - 2. 7 h 15 min
  - 3. 6 h 32 min
  - 4. 5 h 24 min

Question ID : 65497832595  
Status : Answered  
Chosen Option : 3

**Q.5** The cost of levelling a circular park at ₹6.50 per  $m^2$  is ₹36,036. What is the cost (in ₹) of putting a fence around it at ₹18 per m? (Take  $\pi = \frac{22}{7}$ )

- Ans**
- 1. 3,960
  - 2. 4,752
  - 3. 4,644
  - 4. 4,716

Question ID : 65497832604  
Status : Answered  
Chosen Option : 2

**Q.6** The value of  $20 - [7 - \{4 - (8 - \overline{6 + 3})\}]$  is:

- Ans**
- 1. 20
  - 2. 2
  - 3. 16
  - 4. 18

Question ID : 65497832587  
Status : Answered  
Chosen Option : 4

Q.7 An article was sold at  $\frac{5}{8}$  of its cost price. The loss per cent is:

- Ans
- 1. 35
  - 2. 27.5
  - 3. 37.5
  - 4. 32

Question ID : 65497832585  
Status : Answered  
Chosen Option : 3

Q.8 By what percentage is one-third of 90 lesser than three-eighths of 160?

- Ans
- 1. 45%
  - 2. 50%
  - 3. 60%
  - 4. 25%

Question ID : 65497832593  
Status : Answered  
Chosen Option : 2

Q.9 The sum of three numbers is 172. If the ratio of the first number to the second number is 3 : 5 and that of the second number to the third number is 7 : 6, then find the first number.

- Ans
- 1. 42
  - 2. 30
  - 3. 40
  - 4. 58

Question ID : 65497832600  
Status : Answered  
Chosen Option : 1

Q.10 What is the least five-digit number that is exactly divisible by 21, 35, and 56?

- Ans
- 1. 10000
  - 2. 10040
  - 3. 10920
  - 4. 10080

Question ID : 65497832589  
Status : Answered  
Chosen Option : 4



**Q.11** A, B and C can complete a piece of work individually in  $7\frac{1}{2}$  days, 15 days and 30 days, respectively. A and B start working but A quits the job after 3 days. Then C joined B and both did the work till the completion of the work. In how many days will the whole work be completed?

- Ans**
- 1. 12 days
  - 2. 7 days
  - 3. 8 days
  - 4. 6 days

Question ID : 65497832586  
Status : Answered  
Chosen Option : 2

**Q.12** Two numbers are in the ratio 8 : 5. If 17 is subtracted from the first number and 25 is added to the second number, then the ratio becomes 1 : 3. What is the sum of the two numbers?

- Ans**
- 1. 13
  - 2. 39
  - 3. 52
  - 4. 65

Question ID : 65497832580  
Status : Answered  
Chosen Option : 3

**Q.13** If the two numbers are, respectively, 20% and 30% less than a third number, then what percentage of the first number is the second number?

- Ans**
- 1. 87.5%
  - 2. 90.5%
  - 3. 85.5%
  - 4. 101.5%

Question ID : 65497832590  
Status : Answered  
Chosen Option : 1

**Q.14** The amount obtained by investing a certain sum in  $4\frac{3}{4}$  years at 12% p.a. at simple interest is ₹2,175 more than the simple interest on the same sum in 11 years at the same rate. The sum (in ₹) is:

- Ans**
- 1. 8,400
  - 2. 8,700
  - 3. 8,000
  - 4. 8,500

Question ID : 65497832603  
Status : Answered  
Chosen Option : 2

Q.15 The value of  $\frac{5}{14} \div 5\frac{3}{7}$  of  $\frac{7}{19} - \left(\frac{3}{4} - \frac{4}{7}\right)$  is:

- Ans  1. 0  
 2. 5  
 3. 10  
 4. 1

Question ID : 65497832584  
Status : Answered  
Chosen Option : 1

Q.16 23 oranges were bought for ₹193.20 and sold at the rate of ₹108 per dozen. Find the profit percentage correct to one decimal place.

- Ans  1. 5.9%  
 2. 8.4%  
 3. 7.1%  
 4. 4.5%

Question ID : 65497832582  
Status : Answered  
Chosen Option : 3

Q.17 A cyclist covers a distance of 17 km in 2 h. His speed (in km/h) is:

- Ans  1. 8  
 2. 8.5  
 3. 7.5  
 4. 6.5

Question ID : 65497832588  
Status : Answered  
Chosen Option : 2

Q.18 A sum of ₹1,800 gives a simple interest of ₹360 in 3 years 4 months. The rate of interest per annum is:

- Ans  1. 8%  
 2. 10%  
 3. 6%  
 4. 12%

Question ID : 65497832601  
Status : Answered  
Chosen Option : 1

Q.19 A wall clock is listed at ₹1,200 and the discount offered is 10%. What additional discount must be given to bring the net selling price to ₹945?

- Ans  1. 10%  
 2. 12.5%  
 3. 9.25%  
 4. 15%

Question ID : 65497832592  
Status : Answered  
Chosen Option : 2

**Q.20** The average salary of all the workers in an organisation is ₹9,000. The average salary of 8 technicians is ₹14,000 and the average salary of the rest is ₹5,000. Find the total number of workers in the organisation.

- Ans**
- 1. 18
  - 2. 15
  - 3. 20
  - 4. 23

Question ID : 65497832591  
Status : Answered  
Chosen Option : 1

**Q.21** A person bought a table and a chair for ₹2,200. He sold the table at a gain of 15% and the chair at a loss of 5%, thereby gaining 4% on the whole. Find the cost of the table.

- Ans**
- 1. ₹1,125
  - 2. ₹1,050
  - 3. ₹1,200
  - 4. ₹990

Question ID : 65497832599  
Status : Answered  
Chosen Option : 4

**Q.22** A certain sum amounts to ₹9,900 in 4 years and to ₹11,700 in 7 years at the same rate per cent per annum at simple interest. What will be the amount (in ₹) of the same sum at  $9\frac{2}{3}\%$  for  $2\frac{1}{4}$  years at simple interest?

- Ans**
- 1. 9,541.50
  - 2. 9,165.75
  - 3. 10,000.00
  - 4. 9,131.25

Question ID : 65497832583  
Status : Answered  
Chosen Option : 4

**Q.23** The ratio of two numbers a and b is 5 : 8. If 5 is subtracted from a and 3 is added to b, then the ratio becomes 8 : 15. What is the difference between the two original numbers?

- Ans**
- 1. 24
  - 2. 36
  - 3. 30
  - 4. 27

Question ID : 65497832602  
Status : Answered  
Chosen Option : 4

**Q.24** The sum of two numbers is 35 and the HCF and LCM of these numbers are 5 and 60, respectively. Find the sum of the reciprocals of the numbers.

Ans

1.  $\frac{3}{25}$

2.  $\frac{4}{15}$

3.  $\frac{7}{60}$

4.  $\frac{5}{60}$

Question ID : 65497832596

Status : Answered

Chosen Option : 3

**Q.25** A cylindrical tank is 80 cm in diameter and 5.6 m in height. The cost (in ₹) of painting the curved surface of the tank at the rate of ₹20/m<sup>2</sup> is:

(Take  $\pi = \frac{22}{7}$ )

Ans

1. 281.60

2. 301.80

3. 321.20

4. 261.40

Question ID : 65497832581

Status : Answered

Chosen Option : 1

Section : Part D English

**Q.1** Select the option that can be used as a one-word substitute for the given group of words.

The branch of biology that deals with the relations of organisms to one another and to their physical surroundings.

Ans  1. Anthropology

2. Ecology

3. Gerontology

4. Morphology

Question ID : 65497832618

Status : Answered

Chosen Option : 2

**Q.2** Select the most appropriate option to fill in the blank.

It is a disorder that manifests usually in middle \_\_\_\_\_.

Ans  1. ages

2. age

3. life

4. year

Question ID : 65497832622

Status : Answered

Chosen Option : 2

**Q.3** Parts of the given sentence have been given as options. One of them contains a grammatical error. Select the option that has the error.

Lack of calcium in human body usually leads against several health complications.

- Ans  1. leads against  
 2. several health complications  
 3. Lack of calcium  
 4. in human body

Question ID : 65497832616  
Status : Answered  
Chosen Option : 1

**Q.4** The following sentence has been split into four segments. Identify the segment that contains a grammatical error.

Sharada was cooking lunch / when I am going / to give her / the mobile phone.

- Ans  1. Sharada was cooking lunch  
 2. to give her  
 3. the mobile phone  
 4. when I am going

Question ID : 65497832605  
Status : Answered  
Chosen Option : 4

**Q.5** Select the most appropriate meaning of the given idiom.

Having a soft spot for

- Ans  1. Being too ridiculous  
 2. Having soft skin  
 3. Being fond of  
 4. Being angry

Question ID : 65497832615  
Status : Answered  
Chosen Option : 3

**Q.6** Select the most appropriate ANTONYM of the given word.

Ignorance

- Ans  1. Knowledge  
 2. Truth  
 3. Innocence  
 4. Virtue

Question ID : 65497832619  
Status : Answered  
Chosen Option : 1

**Q.7** Select the option that can be used as a one-word substitute for the given group of words.

Someone who buys and sells goods in large amounts to shops and businesses

Ans  1. Wholesaler

2. Merchant

3. Supplier

4. Dealer

Question ID : 65497832608

Status : Answered

Chosen Option : 1

**Q.8** Select the most appropriate synonym of the given word.

Coincidence

Ans  1. Extent

2. Accent

3. Chance

4. Incident

Question ID : 65497832617

Status : Answered

Chosen Option : 3

**Q.9** Select the most appropriate option that can substitute the underlined segment in the given sentence. If there is no need to substitute it, select 'No substitution required'.

Leopards and cats are belong to the same family of animals.

Ans  1. No substitution required

2. belong

3. belongs

4. belonging

Question ID : 65497832624

Status : Answered

Chosen Option : 2

**Q.10** Select the option that will improve the underlined part of the sentence. In case no improvement is needed, select 'No improvement required'.

Neglected for a long time, the ancient monument needs immediate restoration.

Ans  1. Neglecting from a long time

2. No improvement required

3. Having neglect for a long time

4. Neglected in the long time

Question ID : 65497832609

Status : Answered

Chosen Option : 2

Q.11 Select the most appropriate option to fill in the blank.

An important \_\_\_\_\_ of education is to develop character.

- Ans
- 1. scheme
  - 2. purpose
  - 3. means
  - 4. image

Question ID : 65497832610  
Status : Answered  
Chosen Option : 2

Q.12 Select the most appropriate meaning of the given idiom.

To be on pins and needles

- Ans
- 1. To be in an agitated state of suspense
  - 2. To sit on a box of pins
  - 3. To be attacked from both sides
  - 4. To avoid making a decision

Question ID : 65497832620  
Status : Answered  
Chosen Option : 1

Q.13 Select the most appropriate option that can substitute the underlined segment in the given sentence. If there is no need to substitute it, select 'No substitution required'.

Mala's voice is much more melodious to Gita.

- Ans
- 1. much more melodious than Gita's
  - 2. much melodious to Gita's
  - 3. much more melodious to Gita's
  - 4. No substitution required

Question ID : 65497832606  
Status : Answered  
Chosen Option : 1

Q.14 The following sentence has been split into four segments. Identify the segment that contains a grammatical error.

The eldest / prince is / the heir / of the throne.

- Ans
- 1. of the throne
  - 2. The eldest
  - 3. the heir
  - 4. prince is

Question ID : 65497832611  
Status : Answered  
Chosen Option : 1

Q.15 Select the most appropriate option to fill in the blank.

He was in \_\_\_\_\_ of the costumes for the play.

- Ans  1. charge  
 2. care  
 3. duty  
 4. responsibility

Question ID : 65497832623  
Status : Answered  
Chosen Option : 1

Q.16 Select the most appropriate ANTONYM of the given word.

Damage

- Ans  1. Hurt  
 2. Ruin  
 3. Harm  
 4. Mend

Question ID : 65497832612  
Status : Answered  
Chosen Option : 4

Q.17 Select the option that can be used as a one-word substitute for the given group of words.

One who cannot be changed or reformed

- Ans  1. Invincible  
 2. Inevitable  
 3. Incapable  
 4. Incurable

Question ID : 65497832613  
Status : Answered  
Chosen Option : 4

Q.18 Select the INCORRECTLY spelt word.

- Ans  1. Magnificent  
 2. Gregarious  
 3. Commitment  
 4. Persuasion

Question ID : 65497832614  
Status : Answered  
Chosen Option : 1

Q.19 Select the INCORRECTLY spelt word.

- Ans  1. Unassuming  
 2. Unflappable  
 3. Unruffled  
 4. Unanimous

Question ID : 65497832621  
Status : Answered  
Chosen Option : 4



**Q.20** Select the most appropriate synonym of the given word.

**Mirth**

- Ans**  1. Delight  
 2. Joint  
 3. Scene  
 4. View

Question ID : 65497832607

Status : Answered

Chosen Option : 1

**Comprehension:**

In the following passage, some words have been deleted. Read the passage carefully and select the most appropriate option to fill in each blank.

A tic is a repeated, impulsive action, which an actor feels powerless (1)\_\_\_\_\_ or avoid. Only when the individual performs the tic, is tension and anxiety (2)\_\_\_\_\_, within the individual with a tic disorder. Tics can be (3)\_\_\_\_\_ by an emotional state or sensation, and can happen for no obvious reason. General types of tics (4)\_\_\_\_\_ verbal tics, facial tics and (5)\_\_\_\_\_ muscular tics.

**SubQuestion No : 21**

**Q.21** Select the most appropriate option to fill in blank number 1.

- Ans**  1. controls  
 2. controlling  
 3. to control  
 4. controlled

Question ID : 65497832626

Status : Answered

Chosen Option : 3

**Comprehension:**

In the following passage, some words have been deleted. Read the passage carefully and select the most appropriate option to fill in each blank.

A tic is a repeated, impulsive action, which an actor feels powerless (1)\_\_\_\_\_ or avoid. Only when the individual performs the tic, is tension and anxiety (2)\_\_\_\_\_, within the individual with a tic disorder. Tics can be (3)\_\_\_\_\_ by an emotional state or sensation, and can happen for no obvious reason. General types of tics (4)\_\_\_\_\_ verbal tics, facial tics and (5)\_\_\_\_\_ muscular tics.

**SubQuestion No : 22**

**Q.22** Select the most appropriate option to fill in blank number 2.

- Ans**  1. modified  
 2. stored  
 3. added  
 4. released

Question ID : 65497832627

Status : Answered

Chosen Option : 2

## Comprehension:

In the following passage, some words have been deleted. Read the passage carefully and select the most appropriate option to fill in each blank.

A tic is a repeated, impulsive action, which an actor feels powerless (1)\_\_\_\_\_ or avoid. Only when the individual performs the tic, is tension and anxiety (2)\_\_\_\_\_, within the individual with a tic disorder. Tics can be (3)\_\_\_\_\_ by an emotional state or sensation, and can happen for no obvious reason. General types of tics (4)\_\_\_\_\_ verbal tics, facial tics and (5)\_\_\_\_\_ muscular tics.

### SubQuestion No : 23

Q.23 Select the most appropriate option to fill in blank number 3.

- Ans  1. done  
 2. began  
 3. triggered  
 4. elicited

Question ID : 65497832628

Status : Answered

Chosen Option : 4

## Comprehension:

In the following passage, some words have been deleted. Read the passage carefully and select the most appropriate option to fill in each blank.

A tic is a repeated, impulsive action, which an actor feels powerless (1)\_\_\_\_\_ or avoid. Only when the individual performs the tic, is tension and anxiety (2)\_\_\_\_\_, within the individual with a tic disorder. Tics can be (3)\_\_\_\_\_ by an emotional state or sensation, and can happen for no obvious reason. General types of tics (4)\_\_\_\_\_ verbal tics, facial tics and (5)\_\_\_\_\_ muscular tics.

### SubQuestion No : 24

Q.24 Select the most appropriate option to fill in blank number 4.

- Ans  1. include  
 2. included  
 3. including  
 4. includes

Question ID : 65497832629

Status : Answered

Chosen Option : 1

## Comprehension:

In the following passage, some words have been deleted. Read the passage carefully and select the most appropriate option to fill in each blank.

A tic is a repeated, impulsive action, which an actor feels powerless (1)\_\_\_\_\_ or avoid. Only when the individual performs the tic, is tension and anxiety (2)\_\_\_\_\_, within the individual with a tic disorder. Tics can be (3)\_\_\_\_\_ by an emotional state or sensation, and can happen for no obvious reason. General types of tics (4)\_\_\_\_\_ verbal tics, facial tics and (5)\_\_\_\_\_ muscular tics.

### SubQuestion No : 25

Q.25 Select the most appropriate option to fill in blank number 5.

- Ans  1. the other  
 2. others  
 3. another  
 4. other

Question ID : 65497832630

Status : Answered

Chosen Option : 4

Q.1 रिक्त स्थान की पूर्ति के लिए सबसे उपयुक्त विकल्प का चयन करें।

मलेरिया एक \_\_\_\_\_ है।

- Ans
- 1. दुख
  - 2. क्लेश
  - 3. आधि
  - 4. व्याधि

Question ID : 65497832650  
Status : Not Answered  
Chosen Option : --

Q.2 दिये गये वाक्य में रेखांकित अश को प्रतिस्थापित करने के लिए सबसे उपयुक्त विकल्प का चयन करें।

सरकार ने कलाकार को पुरस्कार अर्पित किया।

- Ans
- 1. दान
  - 2. सम्मानित
  - 3. निर्गत
  - 4. प्रदान

Question ID : 65497832649  
Status : Not Answered  
Chosen Option : --

Q.3 प्रत्येक कार्य को फूक फूक कर करना चाहिए।

रेखांकित मुहावरे का अर्थ स्पष्ट कीजिए-

- Ans
- 1. जल्दी से कार्य करना
  - 2. किसी को कार्य करने को देना
  - 3. अच्छी तरह से सोचकर कार्य करना
  - 4. कार्य करने में आलस करना

Question ID : 65497832645  
Status : Not Answered  
Chosen Option : --

Q.4 दिए गए वाक्य का वह भाग ज्ञात करें जिसमें कोई त्रुटि है। यदि कोई त्रुटि नहीं है, तो 'कोई त्रुटि नहीं है' चुनें।

सूखा पड़ने (1)\ का कारण इस बार (2)\ फसल कम है (3)\ कोई त्रुटि नहीं है (4)

- Ans
- 1. 1
  - 2. 4
  - 3. 2
  - 4. 3

Question ID : 65497832631  
Status : Not Answered  
Chosen Option : --

Q.5 अशुद्ध वर्तनी को पहचानिए-

- Ans  1. पड़ोसिन  
 2. चरमोत्सर्क  
 3. झडा  
 4. आजीविका

Question ID : 65497832646  
Status : Not Answered  
Chosen Option : --

Q.6 दिए गए शब्द के विलोम शब्द का चयन करें-

करुण

- Ans  1. मधुर  
 2. नम्र  
 3. निष्ठुर  
 4. दयालु

Question ID : 65497832634  
Status : Not Answered  
Chosen Option : --

Q.7 शुद्ध शब्द को पहचानिए-

- Ans  1. प्रोढ़  
 2. त्रतीय्य  
 3. कुमुदिनी  
 4. कार्यवकरम

Question ID : 65497832647  
Status : Not Answered  
Chosen Option : --

Q.8 दिए गए शब्द का विलोम चुनें।

गमन

- Ans  1. प्रस्थान  
 2. आगमन  
 3. आना  
 4. जाना

Question ID : 65497832639  
Status : Not Answered  
Chosen Option : --

Q.9 दिए गए शब्द का समानार्थी शब्द बताइए-

वानर

- Ans  1. मधुकर  
 2. कपि  
 3. गज  
 4. मनुज

Question ID : 65497832632  
Status : Not Answered  
Chosen Option : --

Q.10 दिए गए वाक्य में रेखांकित खंड को प्रतिस्थापित करने के लिए सबसे उपयुक्त विकल्प का चयन करें।  
यदि इसे प्रतिस्थापित करने की आवश्यकता नहीं है, तो विकल्प 'किसी बदलाव की आवश्यकता नहीं है'  
का चयन करें।

यह कहानी महादेवी वर्मा द्वारा लिखी है।

- Ans  1. द्वारा लिखी गयी है।  
 2. से लिखी है।  
 3. किसी बदलाव की आवश्यकता नहीं है।  
 4. द्वारा लिखा गया है।

Question ID : 65497832638

Status : Not Answered

Chosen Option : --

Q.11 रिक्त स्थान की पूर्ति के लिए सबसे उपयुक्त शब्द का चयन करें।

पुस्तकें, \_\_\_\_\_ का सशक्त माध्यम हैं।

- Ans  1. जानने  
 2. ज्ञानप्राप्ति  
 3. सुज्ञानप्राप्त  
 4. समझ

Question ID : 65497832637

Status : Not Answered

Chosen Option : --

Q.12 आँख में कौन गिर गया - त्रुटि का परिचय दीजिए-

- Ans  1. क्रिया की  
 2. विशेषण की  
 3. सर्वनाम की  
 4. सज्ञा की

Question ID : 65497832643

Status : Not Answered

Chosen Option : --

Q.13 उस विकल्प का चयन करें जो निम्न मुहावरे का सही अर्थ व्यक्त करता है।

ढाक के तीन पात

- Ans  1. अव्यवस्थित होना  
 2. निस्सार बातें करना  
 3. व्यर्थ प्रशंसा करना  
 4. सदा एक ही दशा में रहना

Question ID : 65497832640

Status : Not Answered

Chosen Option : --

Q.14 दिए गए वाक्य का वह भाग ज्ञात करें जिसमें कोई त्रुटि है। यदि कोई त्रुटि नहीं है, तो 'कोई त्रुटि नहीं है' चुनें।

स्त्री जाति के (1)\ कल्याण के लिए (2)\ एक योजना बना था। (3)\ कोई त्रुटि नहीं है (4)

- Ans
- 1. 4
  - 2. 2
  - 3. 1
  - 4. 3

Question ID : 65497832633  
Status : Not Answered  
Chosen Option : --

Q.15 'गोद लिया हुआ पुत्र' वाक्यांश के लिए एक शब्द होगा-

- Ans
- 1. पाल्य
  - 2. तनय
  - 3. दत्तक
  - 4. अनुज

Question ID : 65497832648  
Status : Not Answered  
Chosen Option : --

Q.16 दिए गये वाक्यांश के लिए एक शब्द है-

जिसका कोई अंग बेकार हो गया हो-

- Ans
- 1. वध
  - 2. कुपोषित
  - 3. विकलांग
  - 4. अनाथ

Question ID : 65497832636  
Status : Not Answered  
Chosen Option : --

Q.17 दिए गए वाक्य में रेखांकित खंड को प्रतिस्थापित करने के लिए सबसे उपयुक्त विकल्प का चयन करें। यदि इसे प्रतिस्थापित करने की आवश्यकता नहीं है, तो विकल्प 'किसी बदलाव की आवश्यकता नहीं है' का चयन करें।

आज से उसका लक्ष्य केवल विद्या प्राप्ति होगी।

- Ans
- 1. शेष विद्या प्राप्ति होगी।
  - 2. मात्र विद्या प्राप्ति होगी।
  - 3. किसी बदलाव की आवश्यकता नहीं है।
  - 4. केवल विद्या प्राप्ति होगा।

Question ID : 65497832642  
Status : Not Answered  
Chosen Option : --

Q.18 रिक्त स्थान की पूर्ति के लिए सबसे उपयुक्त शब्द का चयन करें।

यह \_\_\_\_\_ का विषय है कि हमारे देश में अनेक महापुरुष हुए।

- Ans
- 1. दुर्भाग्य
  - 2. उपेक्षित
  - 3. गर्व
  - 4. सामान्य

Question ID : 65497832641  
Status : Not Answered  
Chosen Option : --

Q.19 विहग - रेखांकित शब्द का पर्यायवाची कौन-सा शब्द नहीं है-

- Ans
- 1. पछी
  - 2. पक्षी
  - 3. केहरी
  - 4. खग

Question ID : 65497832644  
Status : Not Answered  
Chosen Option : --

Q.20 दिए गये वाक्यांश के लिए एक शब्द है-

जो एक ही माता के उदर से उत्पन्न हुए हो-

- Ans
- 1. लम्बोदर
  - 2. समआयु
  - 3. समवयस्क
  - 4. सहोदर

Question ID : 65497832635  
Status : Not Answered  
Chosen Option : --

**Comprehension:**

दिए गए गद्यांश में से कुछ शब्द हटा दिए गए हैं। संबंधित प्रश्नों में प्रत्येक सख्या के लिए सबसे उपयुक्त विकल्प का चयन करें।

नारियल खाना जितना अच्छा लगता है, उतना ही (1) \_\_\_\_\_ होता है इसे पेड़ से तोड़ना। नारियल के ऊँचें सीधे खड़े पेड़ तक पहुँचना (2) \_\_\_\_\_ खीर है। जान जोखिम में डालकर नारियल तोड़ने का काम करने वालों को बदले में (3) \_\_\_\_\_ भी बहुत कम मिलती है। इतनी (4) \_\_\_\_\_ से गिरकर कई लोग जान भी गँवा चुके हैं। केरल में अब लोग बदर पाल रहे हैं। उन्हें नारियल तोड़ने के लिए (5) \_\_\_\_\_ दिया जा रहा है। हमारे देश में बदरो की कमी नहीं है। इन्हें नारियल तोड़कर लाने की ट्रेनिंग देने के लिए स्कूल भी खोले गए हैं।

**SubQuestion No : 21**

Q.21 गद्यांश के रिक्त स्थान (1) के लिए सर्वाधिक उपयुक्त शब्द होगा-

- Ans
- 1. कठिन
  - 2. सरल
  - 3. सहज
  - 4. आवश्यक

Question ID : 65497832652  
Status : Not Answered  
Chosen Option : --

## Comprehension:

दिए गए गद्यांश में से कुछ शब्द हटा दिए गए हैं। संबंधित प्रश्नों में प्रत्येक सख्या के लिए सबसे उपयुक्त विकल्प का चयन करें।

नारियल खाना जितना अच्छा लगता है, उतना ही (1) \_\_\_\_\_ होता है इसे पेड़ से तोड़ना। नारियल के ऊँचे सीधे खड़े पेड़ तक पहुँचना (2) \_\_\_\_\_ खीर है। जान जोखिम में डालकर नारियल तोड़ने का काम करने वालों को बदले में (3) \_\_\_\_\_ भी बहुत कम मिलती है। इतनी (4) \_\_\_\_\_ से गिरकर कई लोग जान भी गँवा चुके हैं। केरल में अब लोग बदर पाल रहे हैं। उन्हें नारियल तोड़ने के लिए (5) \_\_\_\_\_ दिया जा रहा है। हमारे देश में बदरो की कमी नहीं है। उन्हें नारियल तोड़कर लाने की ट्रेनिंग देने के लिए स्कूल भी खोले गए हैं।

## SubQuestion No : 22

Q.22 गद्यांश के रिक्त स्थान (2) के लिए सर्वाधिक उपयुक्त शब्द होगा-

- Ans
- 1. सीधी
  - 2. टेढ़ी
  - 3. उल्टी
  - 4. लम्बी

Question ID : 65497832653

Status : Not Answered

Chosen Option : --

## Comprehension:

दिए गए गद्यांश में से कुछ शब्द हटा दिए गए हैं। संबंधित प्रश्नों में प्रत्येक सख्या के लिए सबसे उपयुक्त विकल्प का चयन करें।

नारियल खाना जितना अच्छा लगता है, उतना ही (1) \_\_\_\_\_ होता है इसे पेड़ से तोड़ना। नारियल के ऊँचे सीधे खड़े पेड़ तक पहुँचना (2) \_\_\_\_\_ खीर है। जान जोखिम में डालकर नारियल तोड़ने का काम करने वालों को बदले में (3) \_\_\_\_\_ भी बहुत कम मिलती है। इतनी (4) \_\_\_\_\_ से गिरकर कई लोग जान भी गँवा चुके हैं। केरल में अब लोग बदर पाल रहे हैं। उन्हें नारियल तोड़ने के लिए (5) \_\_\_\_\_ दिया जा रहा है। हमारे देश में बदरो की कमी नहीं है। उन्हें नारियल तोड़कर लाने की ट्रेनिंग देने के लिए स्कूल भी खोले गए हैं।

## SubQuestion No : 23

Q.23 गद्यांश के रिक्त स्थान (3) के लिए सर्वाधिक उपयुक्त शब्द होगा-

- Ans
- 1. नारियल
  - 2. मज़दूरी
  - 3. उन्नति
  - 4. प्रशंसा

Question ID : 65497832654

Status : Not Answered

Chosen Option : --



## Comprehension:

दिए गए गद्यांश में से कुछ शब्द हटा दिए गए हैं। संबंधित प्रश्नों में प्रत्येक सख्या के लिए सबसे उपयुक्त विकल्प का चयन करें।

नारियल खाना जितना अच्छा लगता है, उतना ही (1) \_\_\_\_\_ होता है इसे पेड़ से तोड़ना। नारियल के ऊँचे सीधे खड़े पेड़ तक पहुँचना (2) \_\_\_\_\_ खीर है। जान जोखिम में डालकर नारियल तोड़ने का काम करने वालों को बदले में (3) \_\_\_\_\_ भी बहुत कम मिलती है। इतनी (4) \_\_\_\_\_ से गिरकर कई लोग जान भी गँवा चुके हैं। केरल में अब लोग बदर पाल रहे हैं। उन्हें नारियल तोड़ने के लिए (5) \_\_\_\_\_ दिया जा रहा है। हमारे देश में बदरो की कमी नहीं है। उन्हें नारियल तोड़कर लाने की ट्रेनिंग देने के लिए स्कूल भी खोले गए हैं।

## SubQuestion No : 24

Q.24 गद्यांश के रिक्त स्थान (4) के लिए सर्वाधिक उपयुक्त शब्द होगा-

- Ans
- 1. लम्बाई
  - 2. ऊँचाई
  - 3. नीचे
  - 4. गहराई

Question ID : 65497832655

Status : Not Answered

Chosen Option : --

## Comprehension:

दिए गए गद्यांश में से कुछ शब्द हटा दिए गए हैं। संबंधित प्रश्नों में प्रत्येक सख्या के लिए सबसे उपयुक्त विकल्प का चयन करें।

नारियल खाना जितना अच्छा लगता है, उतना ही (1) \_\_\_\_\_ होता है इसे पेड़ से तोड़ना। नारियल के ऊँचे सीधे खड़े पेड़ तक पहुँचना (2) \_\_\_\_\_ खीर है। जान जोखिम में डालकर नारियल तोड़ने का काम करने वालों को बदले में (3) \_\_\_\_\_ भी बहुत कम मिलती है। इतनी (4) \_\_\_\_\_ से गिरकर कई लोग जान भी गँवा चुके हैं। केरल में अब लोग बदर पाल रहे हैं। उन्हें नारियल तोड़ने के लिए (5) \_\_\_\_\_ दिया जा रहा है। हमारे देश में बदरो की कमी नहीं है। उन्हें नारियल तोड़कर लाने की ट्रेनिंग देने के लिए स्कूल भी खोले गए हैं।

## SubQuestion No : 25

Q.25 गद्यांश के रिक्त स्थान (5) के लिए सर्वाधिक उपयुक्त शब्द होगा-

- Ans
- 1. विकास
  - 2. प्रशिक्षण
  - 3. कौशल
  - 4. अनुरक्षण

Question ID : 65497832656

Status : Not Answered

Chosen Option : --