

**SSC
GD**

**Previous Year Paper
24 Nov 2021 Shift 3**

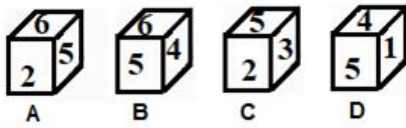
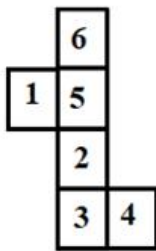


सत्यमेव जयते

Exam Date	24/11/2021
Exam Time :	4:00 PM - 5:30 PM
Subject	Constable GD 2021

Section : Part A General Intelligence and Reasoning

Q.1 Select the dice that can be formed by folding the given sheet along the lines.



- Ans
- 1. A, B, C and D
 - 2. Only A
 - 3. Only A and C
 - 4. Only B

Question ID : 65497835719
 Status : Answered
 Chosen Option : 2

Q.2 Select the number from among the given options that can replace the question mark (?) in the following series.

8, 25, 57, 221, 449, ?

- Ans
- 1. 1879
 - 2. 1798
 - 3. 1978
 - 4. 1789

Question ID : 65497835728
 Status : Not Answered
 Chosen Option : --

Q.3 Four letter-clusters have been given, out of which three are alike in some manner and one is different. Select the letter-cluster that is different.

- Ans 1. XVR
 2. KIEA
 3. RPLF
 4. MKGA

Question ID : 65497835713
Status : Answered
Chosen Option : 2

Q.4 Select the option that is related to the third term in the same way as the second term is related to the first term.

SYMBOL : YSBMLO :: BANQUETS : ?

- Ans 1. ABQNEUST
 2. NABEUQST
 3. QNABSTEU
 4. ABQNSTEU

Question ID : 65497835705
Status : Answered
Chosen Option : 1

Q.5 Four friends Rati, Areema , Sonali and Geet are sitting side by side on the bed facing towards north . Sonali is sitting towards left of Rati. Rati is sitting to immediate left of Areema. Geet is sitting between Rati and Sonali. Who is sitting at second place from the right end?

- Ans 1. Geet
 2. Rati
 3. Sonali
 4. Areema

Question ID : 65497835724
Status : Answered
Chosen Option : 2

Q.6 If the ratio of the present ages of Shikha and Rajkumar is 2 : 1, and 15 years ago the ratio of their ages was 3 : 1, then the present age (in years) of Shikha is:

- Ans 1. 45
 2. 75
 3. 60
 4. 30

Question ID : 65497835711
Status : Answered
Chosen Option : 3

Q.7 If 'P' denotes 'addition', 'Q' denotes 'multiplication', 'R' denotes 'subtraction', and 'S' denotes 'division', then what will be the value of the following expression?

45S (3P7) P5S (8S4) P9Q (15S5)

- Ans
- 1. 32
 - 2. 28
 - 3. 38
 - 4. 34

Question ID : 65497835718

Status : Answered

Chosen Option : 4

Q.8 Six friends R, S, T, U, V and W are sitting in a straight line. T is third from the left and fourth from the right. V is between T and S. Also, S is to the immediate left of U. R is between T and W. Find the position of V from the right side.

- Ans
- 1. Second
 - 2. Fifth
 - 3. Fourth
 - 4. Third

Question ID : 65497835715

Status : Answered

Chosen Option : 4

Q.9 Select the option that is related to the third number in the same way as the second number is related to the first number and the sixth number is related to the fifth number.

23 : 368 :: 25 : ? :: 21 : 294

- Ans
- 1. 382
 - 2. 450
 - 3. 441
 - 4. 371

Question ID : 65497835717

Status : Answered

Chosen Option : 2

Q.10 In a certain code language, 'DOCTOR' is written as 'SQWGTJ' and 'SINGER' is written as 'SGJRNY'. How will 'TAILOR' be written in that language?

- Ans
- 1. TOOMFZ
 - 2. TQQNEZ
 - 3. SQOMFX
 - 4. SQOMFZ

Question ID : 65497835708

Status : Answered

Chosen Option : 4

Q.11 Select the option that is related to the third word in the same way as the second word is related to the first word.

Syphilis : Bacteria :: Tinea pedis : ?

- Ans
- 1. Protozoa
 - 2. Algae
 - 3. Virus
 - 4. Fungi

Question ID : 65497835723

Status : Answered

Chosen Option : 1

Q.12 Select the correct mirror image of the given combination when the mirror is placed at 'PQ' as shown.

KURDARAM
P
|
Q

- Ans
- 1. MARKURDA
 - 2. MARADRAM
 - 3. RAMKURDA
 - 4. MARADRAK

Question ID : 65497835721

Status : Answered

Chosen Option : 2

Q.13 Read the given statements and conclusions carefully. Assuming that the information given in the statements is true, even if it appears to be at variance with commonly known facts, decide which of the given conclusions logically follow(s) from the statements.

Statements:
Some bags are pens.
All pens are boxes.
All bags are books.

Conclusions:
I. Some books are boxes.
II. Some boxes are bags.
III. Some books are pens.

- Ans
- 1. Only conclusions I and III follow
 - 2. Only conclusions II and III follow
 - 3. Only conclusions I and II follow
 - 4. All conclusions I, II and III follow

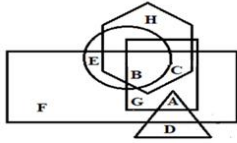
Question ID : 65497835709

Status : Answered

Chosen Option : 2

Q.14 In the following figure, the square represents 'natural satellite', the circle represents 'stars', the rectangle represents 'planets', the hexagon represents 'atmosphere', and the triangle represents 'artificial satellite'.

Which letter represents planets but NOT stars which have atmosphere and natural satellite but NOT artificial satellite.



- Ans
- 1. C
 - 2. E
 - 3. A
 - 4. B

Question ID : 65497835725
 Status : Answered
 Chosen Option : 1

Q.15 Select the combination of letters that when sequentially placed in the blanks of the given series will complete the series.

I _ _ Q Z _ _ K _ _ I J _ Q Z

- Ans
- 1. IJKQZQK
 - 2. IQZIJKI
 - 3. JKIJQZK
 - 4. JKQZKI

Question ID : 65497835727
 Status : Answered
 Chosen Option : 3

Q.16 Select the option in which the given figure is embedded (rotation is NOT allowed).

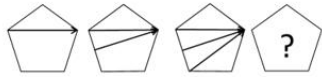


Ans

- 1.
- 2.
- 3.
- 4.

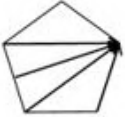
Question ID : 65497835720
 Status : Answered
 Chosen Option : 2

Q.17 Select the figure from among the given options that can replace the question mark (?) in the following series.



Ans

✗ 1.



✗ 2.



✓ 3.



✗ 4.

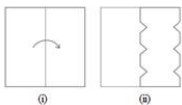


Question ID : 65497835729

Status : Answered

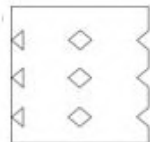
Chosen Option : 3

Q.18 The sequence of folding a piece of paper and the manner in which the folded paper has been cut is shown in the following figures. How would this paper look when unfolded?



Ans

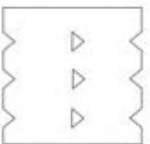
✗ 1.



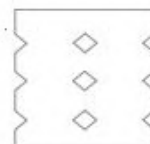
✗ 2.



✗ 3.



✓ 4.



Question ID : 65497835712

Status : Answered

Chosen Option : 4

Q.19 Select the correct option that indicates the arrangement of the given words in the order in which they appear in an English dictionary.

1. Restates
2. Resistance
3. Restoration
4. Resonant
5. Resection

Ans 1. 5, 2, 4, 1, 3
 2. 5, 2, 1, 4, 3
 3. 5, 2, 4, 3, 1
 4. 5, 4, 2, 3, 1

Question ID : 65497835726

Status : Answered

Chosen Option : 1

Q.20 Select the letter-cluster from among the given options that can replace the question mark (?) in the following series.

AS, CQ, EO, ?

Ans 1. HM
 2. GN
 3. GM
 4. HN

Question ID : 65497835722

Status : Answered

Chosen Option : 3

Q.21 In a certain code language, 'BOWLER' is written as 'C p X M f S' and 'NEAT' is written as 'O f b U'. How will 'SERIOUS' be written in that language?

Ans 1. TfsJpUt
 2. TfSJPwt
 3. TfTjPVT
 4. TfSjpvT

Question ID : 65497835706

Status : Answered

Chosen Option : 4

Q.22 Select the option in which the numbers do NOT share the same relationship as that shared by the numbers in the given number-triad.

(3, 6, 18)

Ans 1. (9, 18, 54)
 2. (7, 14, 42)
 3. (8, 16, 56)
 4. (6, 12, 36)

Question ID : 65497835710

Status : Answered

Chosen Option : 4

Q.23 Select the number from among the given options that can replace the question mark (?) in the following series.

5, 16, 28, 36, 71, 90, 234, 342, ?

- Ans
- 1. 893
 - 2. 739
 - 3. 839
 - 4. 793

Question ID : 65497835716
Status : Not Answered
Chosen Option : --

Q.24 If 'A + B' means 'A is the daughter of B', 'A × B' means 'A is the sister of B', and 'A = B' means 'A is the wife of B', then how is G related to R in the expression 'C × G × U + M = R'?

- Ans
- 1. Son
 - 2. Mother
 - 3. Daughter
 - 4. Sister

Question ID : 65497835707
Status : Answered
Chosen Option : 3

Q.25 In a certain code language, 'TIKRI' is coded as '201811369'. How will 'BOARD' be coded in that language?

- Ans
- 1. 2151364
 - 2. 2151184
 - 3. 2301364
 - 4. 2301184

Question ID : 65497835714
Status : Answered
Chosen Option : 3

Section : Part B General Knowledge and General Awareness

Q.1 _____ served as the summer capital of British India between 1864 and 1939.

- Ans
- 1. Kalimpong
 - 2. Shimla
 - 3. Mount Abu
 - 4. Gangtok

Question ID : 65497835737
Status : Answered
Chosen Option : 2

Q.2 Which of the following law states that, "The force between two objects is directly proportional to the product of their masses?"

- Ans
- 1. law of motion
 - 2. law of change of momentum
 - 3. law of inertia
 - 4. law of gravitation

Question ID : 65497835749
Status : Answered
Chosen Option : 3

Q.3 On the basis of which phenomenon does a jet engine work?

- Ans
- 1. Conservation of acceleration
 - 2. Conservation of circular momentum
 - 3. Conservation of velocity
 - 4. Conservation of linear momentum

Question ID : 65497835741
Status : Answered
Chosen Option : 4

Q.4 Where will India's first home for transgender children in need of care and protection soon be established?

- Ans
- 1. Mumbai
 - 2. Bengaluru
 - 3. Delhi
 - 4. Chennai

Question ID : 65497835751
Status : Answered
Chosen Option : 2

Q.5 To which of the following states does the Aji Lamu folk dance belong?

- Ans
- 1. Assam
 - 2. Tripura
 - 3. Manipur
 - 4. Arunachal Pradesh

Question ID : 65497835739
Status : Answered
Chosen Option : 4

Q.6 At Indo Myanmar border which hills adjoin the Mizo Hills and Manipur Hills of the Eastern Highlands of India?

- Ans
- 1. Dongkya
 - 2. Toba Kakar
 - 3. Khasi
 - 4. Chin

Question ID : 65497835730
Status : Answered
Chosen Option : 3

Q.7 Which of the following Constitutional Amendment Acts made it compulsory for the President to give his assent to a Constitutional Amendment Bill?

- Ans
- 1. 100th Amendment Act, 2015
 - 2. 42nd Amendment Act, 1976
 - 3. 24th Amendment Act, 1971
 - 4. 44th Amendment Act, 1978

Question ID : **65497835747**
Status : **Answered**
Chosen Option : **2**

Q.8 Who among the following was honoured with the 2020 Nobel Prize for Literature?

- Ans
- 1. Alice Munro
 - 2. Louise Gluck
 - 3. Doris Lessing
 - 4. Kazuo Ishiguro

Question ID : **65497835744**
Status : **Answered**
Chosen Option : **2**

Q.9 Chirag Shetty who has been awarded with Arjuna Award in 2020 is related to which of the following sports?

- Ans
- 1. Cricket
 - 2. Hockey
 - 3. Swimming
 - 4. Badminton

Question ID : **65497835738**
Status : **Answered**
Chosen Option : **4**

Q.10 Chanakya was Prime Minister under the reign of _____.

- Ans
- 1. Chandragupta Maurya
 - 2. Harshavardhana
 - 3. Bindusara
 - 4. Ashoka

Question ID : **65497835731**
Status : **Answered**
Chosen Option : **1**

Q.11 In which city is the Salar Jung Museum situated?

- Ans
- 1. Chennai
 - 2. Bengaluru
 - 3. Hyderabad
 - 4. Thiruvananthapuram

Question ID : **65497835740**
Status : **Not Answered**
Chosen Option : **--**

Q.12 'Swarnajayanti Gram Swarajgar Yojana' ('SGSY') was launched in the year _____.

- Ans 1. 1999
 2. 2005
 3. 2002
 4. 1995

Question ID : 65497835735
Status : Answered
Chosen Option : 3

Q.13 As per the Census of India 2011, a person aged _____ and above, who can both read and write with understanding in any language, is treated as literate.

- Ans 1. 6
 2. 4
 3. 7
 4. 5

Question ID : 65497835753
Status : Answered
Chosen Option : 1

Q.14 Who among the following was appointed as the Managing Director and Chief Executive Officer of India Post Payments Bank in October 2020?

- Ans 1. Seema Gupta
 2. Apurva Chandra
 3. J Venkatramu
 4. S Aparna

Question ID : 65497835745
Status : Answered
Chosen Option : 3

Q.15 A business enterprise that makes profit primarily through trade, buying goods cheap and selling them at higher prices is known as _____.

- Ans 1. mercenary
 2. bartering
 3. mercantile
 4. merchandising

Question ID : 65497835750
Status : Answered
Chosen Option : 3

Q.16 Small bead-like structures inside the ovary of a flower are called _____.

- Ans 1. ovules
 2. sepals
 3. stamen
 4. petals

Question ID : 65497835742
Status : Answered
Chosen Option : 4

Q.17 _____ bonds are issued in global capital markets outside India by international financial institutions to raise money and lend to Indian companies.

- Ans
- 1. Chandi
 - 2. Mithai
 - 3. Masala
 - 4. Papad

Question ID : 65497835736
Status : Answered
Chosen Option : 1

Q.18 The legendary footballer Diego Maradona, who died in November 2020, had led his country Argentina to a FIFA World Cup title win in:

- Ans
- 1. 1994
 - 2. 1986
 - 3. 1990
 - 4. 1982

Question ID : 65497835746
Status : Not Answered
Chosen Option : --

Q.19 What was the trilateral naval exercise between India, Japan and The US held in November 2020 called?

- Ans
- 1. Simbex -20
 - 2. Malabar
 - 3. Yudh Abhyas
 - 4. Mitra Shakti

Question ID : 65497835733
Status : Answered
Chosen Option : 2

Q.20 बाल न्याय (बच्चों की देखभाल और सुरक्षण) विधेयक, 2014 किस बात की अनुमति देता है?

- Ans
- 1. 14-18 वर्ष की आयु वाले किशोरो को सुधार घरों में भेजा जाना चाहिए।
 - 2. 16-18 वर्ष की आयु वाले किशोरो को अपराधों के लिए 60 दिनों तक सामुदायिक सेवा में रखने का आदेश दिया जाना चाहिए।
 - 3. 16-18 वर्ष की आयु वाले किशोरो के माता-पिता को किशोर द्वारा किए गए अपराध के लिए अपराधी ठहराने की कोशिश की जानी चाहिए।
 - 4. 16-18 वर्ष की आयु वाले किशोरो को जघन्य अपराध के लिए वयस्को की तरह सजा दी जानी चाहिए।

Question ID : 65497835732
Status : Not Answered
Chosen Option : --

Q.21 Which of the following tribes belongs to the Nilgiri Mountains?

- Ans
- 1. Angamis
 - 2. Todas
 - 3. Jarawas
 - 4. Onges

Question ID : 65497835734
Status : Answered
Chosen Option : 4

Q.22 Which of the following places/regions is the natural habitat of the Indian wild ass?

- Ans
- 1. Sunderbans
 - 2. Upper Himalayas
 - 3. Plains of Ganga
 - 4. Little Rann of Kutch

Question ID : 65497835743
Status : Answered
Chosen Option : 4

Q.23 Which of the following countries launched the 'Atal Innovation Mission–Sirius Innovation Programme 3.0' in November 2020?

- Ans
- 1. India and Russia
 - 2. India and Australia
 - 3. India and France
 - 4. India and Japan

Question ID : 65497835748
Status : Not Answered
Chosen Option : --

Q.24 How is the 'average income' of a country calculated?

- Ans
- 1. Total income of the country divided by its total population.
 - 2. Total income of all the residents of the country.
 - 3. Total income of the country minus the population.
 - 4. Total income of the country multiplied by its total population.

Question ID : 65497835752
Status : Answered
Chosen Option : 1

Q.25 Who among the following sportspersons is an Indian professional tennis player?

- Ans
- 1. Prakash Padukone
 - 2. Pullela Gopichand
 - 3. Rohan Bopanna
 - 4. Kuldeep Yadav

Question ID : 65497835754
Status : Answered
Chosen Option : 3

Section : Part C Elementary Mathematics

Q.1 A machine X can produce 1000 bolts in 4 hours and another machine Y can produce 1000 bolts in 12 hours. In how many hours can machines X and Y, working together at their respective constant rates, produce 1000 bolts?

- Ans
- 1. 3
 - 2. 2
 - 3. 6
 - 4. 4

Question ID : 65497835772
Status : Answered
Chosen Option : 1

Q.2 In a company, there are 75% skilled workers and the remaining are unskilled. 84% of the skilled workers and 28% of the unskilled workers are permanent. If the number of temporary workers is 150, then the total number of workers in the company is:

- Ans**
- 1. 600
 - 2. 500
 - 3. 480
 - 4. 400

Question ID : **65497835761**
Status : **Answered**
Chosen Option : **2**

Q.3 Rumi earns 40% more wages than those earned by Erica. Charles earns 60% more wages than those earned by Erica. What percentage are the wages earned by Charles more than those earned by Rumi (correct to two decimal places)?

- Ans**
- 1. 12.29%
 - 2. 10.29%
 - 3. 14.9%
 - 4. 14.29%

Question ID : **65497835771**
Status : **Answered**
Chosen Option : **4**

Q.4 A metallic cone of radius 16 cm and height 36 cm is melted and made into spheres of radius 4 cm each. How many spheres are there?

- Ans**
- 1. 36
 - 2. 32
 - 3. 28
 - 4. 45

Question ID : **65497835779**
Status : **Answered**
Chosen Option : **1**

Q.5 Arun invested ₹7,000 at simple interest for two years at 10% per annum. Bharath invested a certain sum at simple interest for 5 years at 8% per annum. If the amount received by Arun is equal to the amount received by Bharath, then the sum invested by Bharath is:

- Ans**
- 1. ₹5,800
 - 2. ₹6,000
 - 3. ₹6,200
 - 4. ₹6,500

Question ID : **65497835763**
Status : **Answered**
Chosen Option : **2**

Q.6 A sum of money at simple interest amounts to ₹650 in 3 years and to ₹754 in 4 years. The sum is:

- Ans**
- 1. ₹308
 - 2. ₹318
 - 3. ₹388
 - 4. ₹338

Question ID : 65497835768
Status : Answered
Chosen Option : 4

Q.7 The present average age of A, B and C is 60 years and that of B and C is 50 years. What is A's present age?

- Ans**
- 1. 80 years
 - 2. 60 years
 - 3. 75 years
 - 4. 45 years

Question ID : 65497835765
Status : Answered
Chosen Option : 1

Q.8 The difference between the simple interest received from two different sources on ₹1,625 for 5 years is ₹32.50. Find the difference between their rates of interest.

- Ans**
- 1. 0.5%
 - 2. 0.6%
 - 3. 0.4%
 - 4. 0.3%

Question ID : 65497835778
Status : Answered
Chosen Option : 1

Q.9 An article is sold at ₹3,520 at a loss of 12%. At what price should it be sold to earn a profit of 18%?

- Ans**
- 1. ₹4,500
 - 2. ₹5,620
 - 3. ₹4,720
 - 4. ₹4,620

Question ID : 65497835762
Status : Answered
Chosen Option : 3

Q.10 When walking at $\frac{6}{7}$ of his usual speed, a man is 10 minutes late. What is the usual time taken by him to cover that distance?

- Ans**
- 1. 72 min
 - 2. 1 hour
 - 3. 1 hour 15 min
 - 4. 120 min

Question ID : 65497835773
Status : Answered
Chosen Option : 2

Q.11 A person gains 15% by selling an item for a certain price. If he sells it at double the price, then what will be his profit percentage?

- Ans**
- 1. 110%
 - 2. 115%
 - 3. 130%
 - 4. 120%

Question ID : 65497835776
Status : Answered
Chosen Option : 3

Q.12 If 20 men can complete a work in 48 days, then how many men should be employed to complete the same work in 40 days?

- Ans**
- 1. 28
 - 2. 24
 - 3. 22
 - 4. 26

Question ID : 65497835759
Status : Answered
Chosen Option : 2

Q.13 If a 9-digit number $5y97405x2$ is divisible by 72, then the value of $(x - 2y)$, for the greatest value of x , is:

- Ans**
- 1. 1
 - 2. 8
 - 3. 4
 - 4. 9

Question ID : 65497835760
Status : Answered
Chosen Option : 1

Q.14 Simplify the following expression.

$$27 \div 3 \times 4 + 4 \div 2 \text{ of } 2$$

Ans

1. $2\frac{1}{8}$

2. 37

3. $6\frac{1}{4}$

4. $1\frac{1}{8}$

Question ID : 65497835757

Status : Answered

Chosen Option : 2

Q.15 The average of 9 observations was 10, with that of the first 5 being 11 and that of the last 5 being 8. What was the 5th observation?

Ans

1. 5

2. 6

3. 4

4. 7

Question ID : 65497835769

Status : Answered

Chosen Option : 1

Q.16 $(1 - 1/2)(1 - 1/3)(1 - 1/4) \dots \dots \dots (1 - 1/23)$ when simplified will give the result as:

Ans

1. $1/22$

2. $1/2$

3. $1/23$

4. $1/3$

Question ID : 65497835774

Status : Not Answered

Chosen Option : --

Q.17 A wrist watch has been sold for ₹2,300 with a profit of 15%. How much is the profit?

Ans

1. ₹320

2. ₹280

3. ₹300

4. ₹250

Question ID : 65497835758

Status : Answered

Chosen Option : 3

Q.18 A train 180 metres in length, travelling at a uniform speed of 92 km/h, crosses another train, travelling in the same direction at a uniform speed of 74 km/h, in 60 seconds. The length of the second train is:

- Ans**
- 1. 150 metres
 - 2. 160 metres
 - 3. 120 metres
 - 4. 140 metres

Question ID : 65497835775
Status : Answered
Chosen Option : 3

Q.19 A shop announced a discount of 25% on trousers. Umesh went to the shop. He wanted to save ₹500 in discount. How many trousers should he buy to do so, if each trouser costs ₹250?

- Ans**
- 1. 8
 - 2. 6
 - 3. 4
 - 4. 5

Question ID : 65497835770
Status : Answered
Chosen Option : 1

Q.20 The ratio of two numbers is 2 : 5. If 7 is subtracted from each, the ratio of new numbers will be 13 : 43. Find the smallest number.

- Ans**
- 1. 20
 - 2. 30
 - 3. 10
 - 4. 15

Question ID : 65497835777
Status : Answered
Chosen Option : 3

Q.21 After allowing a discount of 30% on the marked price of an article, it is sold at ₹455. The marked price of the article is:

- Ans**
- 1. ₹550
 - 2. ₹650
 - 3. ₹554
 - 4. ₹560

Question ID : 65497835766
Status : Answered
Chosen Option : 2

Q.22 In a large school auditorium, if the teachers make rows of students of 16 each, there will be 14 students left. If they make rows of 24 each, then there will be 22 students left. If they make rows of 25 each, there will be 23 students left and if they make rows of 30 each, there will be 28 students left. What is the minimum number of students present in the school?

- Ans**
- 1. 1202
 - 2. 1200
 - 3. 1198
 - 4. 1189

Question ID : 65497835764
Status : Answered
Chosen Option : 3

Q.23 If the sides of a triangle are 8 cm, 8 cm and 12 cm, then what is the area of the triangle?

- Ans**
- 1. $12\sqrt{7}$ cm²
 - 2. 64 cm²
 - 3. 19 cm²
 - 4. 34 cm²

Question ID : 65497835756
Status : Answered
Chosen Option : 1

Q.24 The ratio of boys and girls in a school of 1600 students is 11 : 9. How many more boys should be admitted to the school to make the ratio 4 : 3?

- Ans**
- 1. 100
 - 2. 160
 - 3. 80
 - 4. 387

Question ID : 65497835755
Status : Answered
Chosen Option : 3

Q.25 A bag contains ₹441 in the form of 50 p, 25 p and 20 p coins in the ratio 4 : 3 : 2. Find the number of 25 p coins.

- Ans**
- 1. 240
 - 2. 420
 - 3. 400
 - 4. 460

Question ID : 65497835767
Status : Answered
Chosen Option : 2

Q.1 The following sentence has been split into four segments. Identify the segment that contains a grammatical error.

Tortoises inhabit all of / the world's landmasses / except Australia / and Antarctica.

- Ans** 1. Tortoises inhabit all of
 2. except Australia
 3. the world's landmasses
 4. and Antarctica

Question ID : **65497835791**
Status : **Not Answered**
Chosen Option : --

Q.2 Select the **INCORRECTLY** spelt word.

- Ans** 1. Nerture
 2. Capture
 3. Structure
 4. Lecture

Question ID : **65497835788**
Status : **Not Answered**
Chosen Option : --

Q.3 Select the option that can be used as a one-word substitute for the given group of words.

A medicine used to nullify the effect of poison

- Ans** 1. Antidote
 2. Antibiotic
 3. Antigen
 4. Antiseptic

Question ID : **65497835796**
Status : **Not Answered**
Chosen Option : --

Q.4 Select the most appropriate meaning of the given idiom.

Toe the line

- Ans** 1. Follow the rules
 2. Start early
 3. Touch the feet
 4. Finish first

Question ID : **65497835787**
Status : **Not Answered**
Chosen Option : --

Q.5 Select the most appropriate option that can substitute the underlined segment in the given sentence. If there is no need to substitute it, select 'No substitution required'.

It was such a funny story that we cannot help laughed.

- Ans
- 1. cannot help laughing
 - 2. could not help laughed
 - 3. No substitution required
 - 4. could not help laughing

Question ID : **65497835780**
Status : **Not Answered**
Chosen Option : --

Q.6 Select the most appropriate option that can substitute the underlined word in the given sentence.

After the bag was shut and barrelled, he realised that he had forgotten to put in the book.

- Ans
- 1. strapped
 - 2. rebounded
 - 3. scrambled
 - 4. scratched

Question ID : **65497835783**
Status : **Not Answered**
Chosen Option : --

Q.7 Select the most appropriate option to fill in the blank.

The boy walked at a fast _____.

- Ans
- 1. pose
 - 2. place
 - 3. peace
 - 4. pace

Question ID : **65497835798**
Status : **Not Answered**
Chosen Option : --

Q.8 The following sentence has been split into four segments. Identify the segment that contains a grammatical error.

We bought / good quality / furnitures / for our new house.

- Ans
- 1. We bought
 - 2. furnitures
 - 3. good quality
 - 4. for our new house

Question ID : **65497835794**
Status : **Not Answered**
Chosen Option : --

Q.9 Select the option that can be used as a one-word substitute for the given group of words.

A place where wild animals are kept in their natural environment

- Ans 1. Pantry
 2. Sanctuary
 3. Aviary
 4. Tannery

Question ID : 65497835786
Status : Not Answered
Chosen Option : --

Q.10 Select the correctly spelt word.

- Ans 1. Conscientios
 2. Conscentious
 3. Conscientous
 4. Conscientious

Question ID : 65497835797
Status : Not Answered
Chosen Option : --

Q.11 The following sentence has been divided into parts. One of them may contain an error. Select the part that contains the error from the given options. If you don't find any error, select 'No error' as your answer.

A good book / is one of / our best friends.

- Ans 1. is one of
 2. A good book
 3. No error
 4. our best friends

Question ID : 65497835781
Status : Not Answered
Chosen Option : --

Q.12 Select the most appropriate option to fill in the blank.

Suddenly, it started raining and I _____ an umbrella from the office.

- Ans 1. borrowed
 2. criticised
 3. lended
 4. substituted

Question ID : 65497835784
Status : Not Answered
Chosen Option : --

Q.13 Select the most appropriate synonym of the given word.

Amusing

- Ans 1. Tiresome
 2. Dull
 3. Laughable
 4. Wise

Question ID : 65497835782

Status : Not Answered

Chosen Option : --

Q.14 Select the most appropriate ANTONYM of the given word.

Diverge

- Ans 1. Depart
 2. Converge
 3. Contrast
 4. Submerge

Question ID : 65497835790

Status : Not Answered

Chosen Option : --

Q.15 Select the most appropriate ANTONYM of the given word.

Chaste

- Ans 1. Vicious
 2. Corrupt
 3. Cruel
 4. Virtuous

Question ID : 65497835795

Status : Not Answered

Chosen Option : --

Q.16 Select the option that can be used as a one-word substitute for the given group of words.

Light rain falling in small drops

- Ans 1. Downpour
 2. Stream
 3. Dew
 4. Drizzle

Question ID : 65497835793

Status : Not Answered

Chosen Option : --

Q.17 Select the most appropriate option that can substitute the underlined segment in the given sentence. If there is no need to substitute it, select 'No substitution required'.

My brother and Raj are good friends. They are knowing each other for at least 10 years.

- Ans
- 1. No substitution required
 - 2. knew
 - 3. have known
 - 4. are known

Question ID : 65497835799
Status : Not Answered
Chosen Option : --

Q.18 Select the most appropriate synonym of the given word.

Hurdle

- Ans
- 1. Rudiment
 - 2. Compliment
 - 3. Obstacle
 - 4. Assistance

Question ID : 65497835792
Status : Not Answered
Chosen Option : --

Q.19 Select the most appropriate option to fill in the blank.

The gentleman looked at the beautiful lady with great _____.

- Ans
- 1. vocation
 - 2. admiration
 - 3. reaction
 - 4. duration

Question ID : 65497835789
Status : Not Answered
Chosen Option : --

Q.20 Select the most appropriate meaning of the given idiom.

Hand in hand

- Ans
- 1. Easily
 - 2. Vigorously
 - 3. In totality
 - 4. Together

Question ID : 65497835785
Status : Not Answered
Chosen Option : --

Comprehension:

In the following passage, some words have been deleted. Read the passage carefully and select the most appropriate option to fill in each blank.

Dust storms do not just happen in the middle of the desert. They can happen in (1)_____ dry area where loose dirt can (2)_____ be picked up. Don't be surprised (3)_____ you suddenly saw a dust storm (4)_____ your way. Dust storms usually (5)_____ without warning.

SubQuestion No : 21

Q.21 Select the most appropriate option to fill in blank no.1.

- Ans
- 1. few
 - 2. all
 - 3. much
 - 4. any

Question ID : 65497835801

Status : Not Answered

Chosen Option : --

Comprehension:

In the following passage, some words have been deleted. Read the passage carefully and select the most appropriate option to fill in each blank.

Dust storms do not just happen in the middle of the desert. They can happen in (1)_____ dry area where loose dirt can (2)_____ be picked up. Don't be surprised (3)_____ you suddenly saw a dust storm (4)_____ your way. Dust storms usually (5)_____ without warning.

SubQuestion No : 22

Q.22 Select the most appropriate option to fill in blank no.2.

- Ans
- 1. slowly
 - 2. casually
 - 3. properly
 - 4. easily

Question ID : 65497835802

Status : Not Answered

Chosen Option : --

Comprehension:

In the following passage, some words have been deleted. Read the passage carefully and select the most appropriate option to fill in each blank.

Dust storms do not just happen in the middle of the desert. They can happen in (1)_____ dry area where loose dirt can (2)_____ be picked up. Don't be surprised (3)_____ you suddenly saw a dust storm (4)_____ your way. Dust storms usually (5)_____ without warning.

SubQuestion No : 23

Q.23 Select the most appropriate option to fill in blank no.3.

- Ans
- 1. whether
 - 2. so
 - 3. until
 - 4. if

Question ID : 65497835803

Status : Not Answered

Chosen Option : --

Comprehension:

In the following passage, some words have been deleted. Read the passage carefully and select the most appropriate option to fill in each blank.

Dust storms do not just happen in the middle of the desert. They can happen in (1)_____ dry area where loose dirt can (2)_____ be picked up. Don't be surprised (3)_____ you suddenly saw a dust storm (4)_____ your way. Dust storms usually (5)_____ without warning.

SubQuestion No : 24

Q.24 Select the most appropriate option to fill in blank no.4.

- Ans 1. heading
 2. directing
 3. deciding
 4. lashing

Question ID : 65497835804
Status : Not Answered
Chosen Option : --

Comprehension:

In the following passage, some words have been deleted. Read the passage carefully and select the most appropriate option to fill in each blank.

Dust storms do not just happen in the middle of the desert. They can happen in (1)_____ dry area where loose dirt can (2)_____ be picked up. Don't be surprised (3)_____ you suddenly saw a dust storm (4)_____ your way. Dust storms usually (5)_____ without warning.

SubQuestion No : 25

Q.25 Select the most appropriate option to fill in blank no.5.

- Ans 1. show
 2. arrive
 3. enter
 4. reach

Question ID : 65497835805
Status : Not Answered
Chosen Option : --

Section : Part D Hindi

Q.1 रिक्त स्थान की पूर्ति के लिए सबसे उपयुक्त शब्द का चयन करें-

राम ने रावण का _____ किया।

- Ans 1. वध
 2. हत्या
 3. मृत्यु
 4. मौत

Question ID : 65497835824
Status : Answered
Chosen Option : 1

Q.2 रिक्त स्थान की पूर्ति के लिए सबसे उपयुक्त शब्द का चयन करें।

_____ के लिए पौष्टिक भोजन आवश्यक है।

- Ans 1. स्वास्थ्य
 2. जीवतता
 3. अस्वास्थ्य
 4. बीमारी

Question ID : 65497835812
Status : Answered
Chosen Option : 1

Q.3 उस विकल्प का चयन करें जो निम्न मुहावरे का सही अर्थ व्यक्त करता है।

हथेली पर सरसो उगाना

- Ans 1. लड़ाई करना
 2. खेती करना
 3. भाग जाना
 4. असंभव काम को संभव करना

Question ID : 65497835820
Status : Answered
Chosen Option : 4

Q.4 उस विकल्प का चयन करें जो निम्न मुहावरे का सही अर्थ व्यक्त करता है।

फूल झड़ना

- Ans 1. प्रिय वचन बोलना
 2. पतझड़ होना
 3. हल्की बातें बोलना
 4. सुन्दर लगना

Question ID : 65497835815
Status : Answered
Chosen Option : 1

Q.5 सही वर्तनी वाले शब्द का चयन करें।

- Ans 1. निरामिष
 2. निरामिश
 3. निर्मिश
 4. निरामिस

Question ID : 65497835816
Status : Answered
Chosen Option : 2

Q.6 रिक्त स्थान की पूर्ति के लिए सबसे उपयुक्त शब्द का चयन करें।

मेरे द्वारा _____ चित्र बैठक में टँगा था।

- Ans 1. चित्रित
 2. लिखित
 3. निर्मित
 4. रचित

Question ID : 65497835811
Status : Answered
Chosen Option : 4

Q.7 दिये गये वाक्यांश के लिए एक सार्थक शब्द का चयन कीजिए।

उसी समय में होने वाला या रहने वाला

- Ans 1. समदर्शी
 2. समसामयिक
 3. सार्वजनिक
 4. सामुदायिक

Question ID : 65497835808
Status : Answered
Chosen Option : 2

Q.8 सही वर्तनी वाले शब्द का चयन करें।

- Ans 1. हसतान्तरित
 2. हस्ततरित
 3. हस्तातरीत
 4. हस्तातरित

Question ID : 65497835817
Status : Answered
Chosen Option : 1

Q.9 दिए गए वाक्य का वह भाग ज्ञात करें जिसमें कोई त्रुटि है। यदि कोई त्रुटि नहीं है, तो 'कोई त्रुटि नहीं है' चुनें।

शत्रु पर (1)/ गोले और तोपों से (2)/ आक्रमण कर दिया गया। (3)/ कोई त्रुटि नहीं है(4)

- Ans 1. 3
 2. 1
 3. 4
 4. 2

Question ID : 65497835806
Status : Answered
Chosen Option : 2

Q.10 दिए गए वाक्य में रेखांकित खंड को प्रतिस्थापित करने के लिए सबसे उपयुक्त विकल्प का चयन करें। यदि इसे प्रतिस्थापित करने की आवश्यकता नहीं है, तो विकल्प 'किसी बदलाव की आवश्यकता नहीं है' का चयन करें।

न जाने क्यों, तुम बेफ़िज़ूल की बातों पर बहस कर लेते हो।

- Ans
- 1. बेफ़िज़ूल में
 - 2. बेफ़िज़ूल की बातों में
 - 3. किसी बदलाव की आवश्यकता नहीं है।
 - 4. फ़िज़ूल की बातों पर

Question ID : 65497835823

Status : Answered

Chosen Option : 3

Q.11 'युद्ध करने की प्रबल इच्छा' इस वाक्यांश के लिए एक सार्थक शब्द दीजिए।

- Ans
- 1. दुर्जेय
 - 2. युयुत्सु
 - 3. युयुत्सा
 - 4. अजातशत्रु

Question ID : 65497835809

Status : Answered

Chosen Option : 2

Q.12 दिए गए वाक्य का वह भाग ज्ञात करें जिसमें कोई त्रुटि है। यदि कोई त्रुटि नहीं है, तो 'कोई त्रुटि नहीं है' चुनें।

संसार की प्राचीन भाषा में (1) सस्कृत प्राचीनतम (2) भाषा मानी जाती है। (3) कोई त्रुटि नहीं है (4)

- Ans
- 1. 3
 - 2. 2
 - 3. 4
 - 4. 1

Question ID : 65497835813

Status : Answered

Chosen Option : 4

Q.13 दिए गए वाक्य में रेखांकित खंड को प्रतिस्थापित करने के लिए सबसे उपयुक्त विकल्प का चयन करें। यदि इसे प्रतिस्थापित करने की आवश्यकता नहीं है, तो विकल्प 'किसी बदलाव की आवश्यकता नहीं है' का चयन करें।

यह बात तुम लोगों के ऊपर निर्भर है।

- Ans
- 1. लोग के ऊपर
 - 2. लोगों पर
 - 3. लोगों के पर
 - 4. किसी बदलाव की आवश्यकता नहीं है।

Question ID : 65497835818

Status : Answered

Chosen Option : 2

Q.14 दिए गए वाक्य में रेखांकित खंड को प्रतिस्थापित करने के लिए सबसे उपयुक्त विकल्प का चयन करें।
यदि इसे प्रतिस्थापित करने की आवश्यकता नहीं है, तो विकल्प 'किसी बदलाव की आवश्यकता नहीं है'
का चयन करें।

हम दसवी कक्षा के छात्र आपको निवेदन करते हैं।

- Ans
- 1. किसी बदलाव की आवश्यकता नहीं है।
 - 2. हम दसवी कक्षा के छात्र
 - 3. आपसे
 - 4. निवेदन करते हैं

Question ID : 65497835810
Status : Answered
Chosen Option : 3

Q.15 दिए गए शब्द का विलोम चुनें।

अपेक्षा

- Ans
- 1. उपेक्षा
 - 2. सापेक्ष
 - 3. अनापेक्षा
 - 4. निरपेक्ष

Question ID : 65497835819
Status : Answered
Chosen Option : 1

Q.16 दिए गए शब्द का समानार्थी शब्द चुनें-

झगड़ा

- Ans
- 1. खार
 - 2. विरोध
 - 3. बैर
 - 4. द्वन्द्व

Question ID : 65497835822
Status : Answered
Chosen Option : 2

Q.17 'जो पढ़ा न जा सके' वाक्यांश के लिए एक शब्द होगा-

- Ans
- 1. अकथनीय
 - 2. अपठनीय
 - 3. पठित
 - 4. अपठित

Question ID : 65497835825
Status : Answered
Chosen Option : 2

Q.18 विलोम शब्दों का सही युग्म निम्न में से कौन सा है?

- Ans 1. क्रोध - गुस्सा
 2. आस्तिक - नास्तिक
 3. धरा - पृथ्वी
 4. महात्मा - सत

Question ID : 65497835807

Status : Answered

Chosen Option : 2

Q.19 दिए गए शब्द का समानार्थी शब्द बताइए-

हिरन

- Ans 1. गज
 2. मृग
 3. दादुर
 4. केसरी

Question ID : 65497835814

Status : Answered

Chosen Option : 3

Q.20 दिए गए वाक्य का वह भाग ज्ञात करें जिसमें कोई त्रुटि है। यदि कोई त्रुटि नहीं है, तो 'कोई त्रुटि नहीं है' चुनें।

मैंने अपने (1)/ मित्र के नाम क्लर्क को (2)/ एक पत्र लिखाया। (3)/ कोई त्रुटि नहीं है। (4)

- Ans 1. 1
 2. 3
 3. 4
 4. 2

Question ID : 65497835821

Status : Answered

Chosen Option : 4

Comprehension:

दिए गए गद्यांश में से कुछ शब्द हटा दिए गए हैं। संबंधित प्रश्नों में प्रत्येक सख्या के लिए सबसे उपयुक्त विकल्प का चयन कीजिए।

(1) _____ का काम बहुत अशो में (2) _____ के काम से मिलताजुलता है। मधुमक्खिया मकरंद सग्रह करने के लिए कोसों के चक्कर लगाती हैं और अच्छे-अच्छे (3) _____ पर बैठकर उनका रस लेती हैं। तभी तो उनके मधु में ससार की सर्वश्रेष्ठ (4) _____ रहती है। यदि आप अच्छे (5) _____ बनाना चाहते हैं तो आपको भी यह वृत्ति ग्रहण करनी चाहिए।

SubQuestion No : 21

Q.21 गद्यांश के रिक्त स्थान (1) के लिए सर्वाधिक उपयुक्त शब्द होगा-

- Ans 1. अभियता
 2. वकील
 3. राजनेता
 4. लेखक

Question ID : 65497835827

Status : Answered

Chosen Option : 4

Comprehension:

दिए गए गद्यांश में से कुछ शब्द हटा दिए गए हैं। सबधित प्रश्नों में प्रत्येक सख्या के लिए सबसे उपयुक्त विकल्प का चयन कीजिए।

(1) _____ का काम बहुत अशो में (2) _____ के काम से मिलताजुलता है। मधुमक्खिया मकरद सग्रह करने के लिए कोसो के चक्कर लगाती हैं और अच्छे-अच्छे (3) _____ पर बैठकर उनका रस लेती हैं। तभी तो उनके मधु में ससार की सर्वश्रेष्ठ (4) _____ रहती है। यदि आप अच्छे (5) _____ बनाना चाहते हैं तो आपको भी यह वृत्ति ग्रहण करनी चाहिए।

SubQuestion No : 22

Q.22 गद्यांश के रिक्त स्थान (2) के लिए सर्वाधिक उपयुक्त शब्द होगा-

- Ans
- 1. चींटियो
 - 2. मधुमक्खियो
 - 3. पछियो
 - 4. पशुओ

Question ID : 65497835828

Status : Answered

Chosen Option : 2

Comprehension:

दिए गए गद्यांश में से कुछ शब्द हटा दिए गए हैं। सबधित प्रश्नों में प्रत्येक सख्या के लिए सबसे उपयुक्त विकल्प का चयन कीजिए।

(1) _____ का काम बहुत अशो में (2) _____ के काम से मिलताजुलता है। मधुमक्खिया मकरद सग्रह करने के लिए कोसो के चक्कर लगाती हैं और अच्छे-अच्छे (3) _____ पर बैठकर उनका रस लेती हैं। तभी तो उनके मधु में ससार की सर्वश्रेष्ठ (4) _____ रहती है। यदि आप अच्छे (5) _____ बनाना चाहते हैं तो आपको भी यह वृत्ति ग्रहण करनी चाहिए।

SubQuestion No : 23

Q.23 गद्यांश के रिक्त स्थान (3) के लिए सर्वाधिक उपयुक्त शब्द होगा-

- Ans
- 1. टहनियो
 - 2. फूलो
 - 3. पेड़ो
 - 4. पत्तो

Question ID : 65497835829

Status : Answered

Chosen Option : 2

Comprehension:

दिए गए गद्यांश में से कुछ शब्द हटा दिए गए हैं। सबधित प्रश्नों में प्रत्येक सख्या के लिए सबसे उपयुक्त विकल्प का चयन कीजिए।

(1) _____ का काम बहुत अशो में (2) _____ के काम से मिलताजुलता है। मधुमक्खिया मकरद सग्रह करने के लिए कोसो के चक्कर लगाती हैं और अच्छे-अच्छे (3) _____ पर बैठकर उनका रस लेती हैं। तभी तो उनके मधु में ससार की सर्वश्रेष्ठ (4) _____ रहती है। यदि आप अच्छे (5) _____ बनाना चाहते हैं तो आपको भी यह वृत्ति ग्रहण करनी चाहिए।

SubQuestion No : 24

Q.24 गद्यांश के रिक्त स्थान (4) के लिए सर्वाधिक उपयुक्त शब्द होगा-

- Ans
- 1. सुदरता
 - 2. चतुरता
 - 3. मधुरता
 - 4. कटुता

Question ID : 65497835830

Status : Answered

Chosen Option : 3

Comprehension:

दिए गए गद्यांश में से कुछ शब्द हटा दिए गए हैं। संबंधित प्रश्नों में प्रत्येक सख्या के लिए सबसे उपयुक्त विकल्प का चयन कीजिए।

(1) _____ का काम बहुत अशो में (2) _____ के काम से मिलताजुलता है। मधुमक्खिया मकरद सग्रह करने के लिए कोसो के चक्कर लगाती है और अच्छे-अच्छे (3) _____ पर बैठकर उनका रस लेती है। तभी तो उनके मधु में ससार की सर्वश्रेष्ठ (4) _____ रहती है। यदि आप अच्छे (5) _____ बनाना चाहते हैं तो आपको भी यह वृत्ति ग्रहण करनी चाहिए।

SubQuestion No : 25

Q.25 गद्यांश के रिक्त स्थान (5) के लिए सर्वाधिक उपयुक्त शब्द होगा-

- Ans
- 1. समाजसेवी
 - 2. पुलिस
 - 3. पत्रकार
 - 4. लेखक

Question ID : 65497835831

Status : Answered

Chosen Option : 4