



सत्यमेव जयते

**SSC  
GD**

**Previous Year Paper  
18 Nov 2021 Shift 2**

Exam Date	18/11/2021
Exam Time :	12:30 PM - 2:00 PM
Subject	Constable GD 2021

Section : Part A General Intelligence and Reasoning

**Q.1** Select the option that is related to the third number in the same way as the second number is related to the first number.

70 : 8 :: 87 : ?

- Ans
- 1. 8
  - 2. 9
  - 3. 6
  - 4. 7

Question ID : 65497830638  
Status : Answered  
Chosen Option : 2

**Q.2** Select the correct option that indicates the arrangement of the given words in the order in which they appear in an English dictionary.

1. Hostile
2. Hostel
3. Hospital
4. House
5. Hopeless

- Ans
- 1. 5, 3, 1, 2, 4
  - 2. 3, 5, 2, 1, 4
  - 3. 5, 3, 2, 1, 4
  - 4. 4, 3, 2, 1, 5

Question ID : 65497830625  
Status : Answered  
Chosen Option : 1

**Q.3** Eight friends, A, B, C, D, E, F, G and H, are sitting around a round table at equal distance between each other, facing the centre of the table. D is sitting between F and H. A is not sitting between B and G. C is sitting third to the right of A. E is sitting second to the left of D. Who is sitting opposite to A?

- Ans
- 1. E
  - 2. F
  - 3. H
  - 4. D

Question ID : 65497830637  
Status : Marked For Review  
Chosen Option : 3

**Q.4** P, Q, R, S, T and U are sitting on a bench. Q is at the right end. R is sitting to the immediate right of S. U is sitting to the immediate left of T, and T is sitting to the immediate left of Q. P is sitting to the immediate left of S. Who is sitting at the left end?

- Ans
- 1. U
  - 2. T
  - 3. R
  - 4. P

Question ID : 65497830646  
Status : Answered  
Chosen Option : 4

**Q.5** Select the number from among the given options that can replace the question mark (?) in the following series.

123, 98, 82, 73, 69, ?

- Ans
- 1. 49
  - 2. 68
  - 3. 52
  - 4. 57

Question ID : 65497830647  
Status : Answered  
Chosen Option : 2

**Q.6** A number when added to 4 times to itself, gets equal to 10 times to its predecessor. Find the number.

- Ans
- 1. 2
  - 2. 10
  - 3. 8
  - 4. 5

Question ID : 65497830635  
Status : Answered  
Chosen Option : 1

**Q.7** Select the combination of letters that when sequentially placed in the blanks of the given series will complete the series.

Z \_ K F \_ O K G Z \_ K \_ Z O \_ I

- Ans
- 1. O Z O H K
  - 2. O Z K H K
  - 3. O Z O H Z
  - 4. K Z O H K

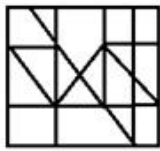
Question ID : 65497830626  
Status : Answered  
Chosen Option : 1

**Q.8** Select the option in which the given figure is embedded (rotation is NOT allowed).

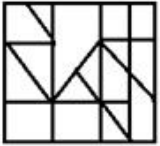


**Ans**

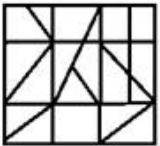
✓ 1.



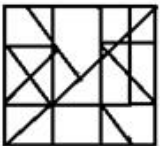
✗ 2.



✗ 3.



✗ 4.



Question ID : 65497830641

Status : Answered

Chosen Option : 1

**Q.9** 'Dictionary' is related to 'Meaning' in the same way as 'Encyclopaedia' is related to \_\_\_\_\_.

**Ans** ✗ 1. Synonyms

✗ 2. Phrase

✗ 3. News

✓ 4. Knowledge

Question ID : 65497830644

Status : Answered

Chosen Option : 4

**Q.10** Read the given statements and conclusions carefully. Assuming that the information given in the statements is true, even if it appears to be at variance with commonly known facts, decide which of the given conclusions logically follow(s) from the statements.

**Statements:**

All girls are actors.  
All actors are singers.

**Conclusions:**

1. Some girls are not singers.
2. No actor is a girl.
3. All girls are singers.

- Ans**  1. Both conclusions 1 and 3 follow  
 2. Only conclusion 3 follows  
 3. Only conclusion 1 follows  
 4. Only conclusion 2 follows

Question ID : 65497830633

Status : Answered

Chosen Option : 2

**Q.11** Select the letter-cluster from among the given options that can replace the question mark (?) in the following series.

FPW, EQV, DRU, ?

- Ans**  1. COS  
 2. CST  
 3. TWX  
 4. CSG

Question ID : 65497830642

Status : Answered

Chosen Option : 2

**Q.12** In a certain code language, 'GREW' is coded as '209224'. How will 'TYPE' be coded in that language?

- Ans**  1. 721122  
 2. 721162  
 3. 202511  
 4. 511237

Question ID : 65497830645

Status : Answered

Chosen Option : 1

**Q.13** In a certain code language, 'Where are you' is written as 'me ki na', 'When you come' is written as 'bel na se', and 'Come back home' is written as 'se ne jo'. How will 'When' be written in that language?

- Ans**  1. ki  
 2. se  
 3. me  
 4. bel

Question ID : 65497830632

Status : Answered

Chosen Option : 4

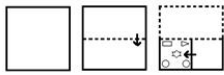
**Q.14** Study the given pattern carefully and select the number that can replace the question mark (?) in it.

9 18 ?  
18 32 79  
27 58 46

- Ans
- 1. 22
  - 2. 21
  - 3. 26
  - 4. 25

Question ID : 65497830634  
Status : Answered  
Chosen Option : 4

**Q.15** The sequence of folding a piece of paper and the manner in which the folded paper has been cut is shown in the following figures. How would this paper look when unfolded?

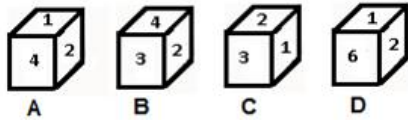
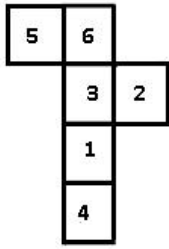


Ans

- 1.
- 2.
- 3.
- 4.

Question ID : 65497830636  
Status : Answered  
Chosen Option : 2

Q.16 Select the dice that can be formed by folding the given sheet along the lines.



- Ans
- 1. Only A
  - 2. D and B
  - 3. A and C
  - 4. Only C


Question ID : 65497830640  
Status : Answered  
Chosen Option : 3

Q.17 Select the figure that will replace the question mark (?) in the following figure series.




Ans

✗ 1.



✗ 2.



✓ 3.



✗ 4.



Question ID : 65497830628

Status : Answered

Chosen Option : 3

Q.18 Select the option that is related to the third term in the same way as the second term is related to the first term.

CREAM : FPJYZ :: CHECK : ?

Ans ✗ 1. FZJFV

✓ 2. FFJAV

✗ 3. FPJZV

✗ 4. FFJFV

Question ID : 65497830629

Status : Answered

Chosen Option : 2

Q.19 In a certain code language, 'CHAINED' is written as 'EJYGPCF'. How will 'MEADOW' be written in that language?

Ans ✗ 1. PCYFMY

✗ 2. OCYFNY

✓ 3. OCYFMY

✗ 4. PCYFQY

Question ID : 65497830630

Status : Answered

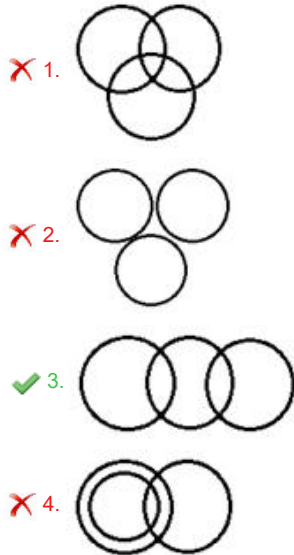
Chosen Option : 3



**Q.20** Select the Venn diagram that best represents the relationship between the following classes.

Passengers, Flight, Train

Ans



Question ID : 65497830649  
Status : Answered  
Chosen Option : 3

**Q.21** Select the number from among the given options that can replace the question mark (?) in the following series.

17, 18, 26, 53, 117, ?

- Ans  1. 302
2. 242
3. 336
4. 232

Question ID : 65497830627  
Status : Answered  
Chosen Option : 2

**Q.22** If 'A' denotes 'addition', 'B' denotes 'subtraction', 'C' denotes 'multiplication' and 'D' denotes 'division', then what will be the value of the following expression?

6 C (57 B 8) D 7 B 32 A 9

- Ans  1. 27
2. 18
3. 15
4. 19

Question ID : 65497830639  
Status : Answered  
Chosen Option : 4

**Q.23** Select the correct mirror image of the given combination when the mirror is placed at PQ as shown.

QZ9JFN |

- Ans
- 1. MFI1850
  - 2. MFI1850
  - 3. MFI1850
  - 4. MFI1850

Question ID : 65497830648  
Status : Answered  
Chosen Option : 2

**Q.24** Four letter-clusters have been given, out of which three are alike in some manner and one is different. Select the letter-cluster that is different.

- Ans
- 1. ODS
  - 2. AHI
  - 3. GNU
  - 4. DOU

Question ID : 65497830643  
Status : Answered  
Chosen Option : 4

**Q.25** Ajay and Charul are brother and sister. Manoj and Darshan are the sons of Kripal and Sona. Sona is the mother-in-law of Charul's mother Swapnil. Neha, Niti and Nakul are the daughters of Manoj and the only cousins of Ajay. How many children does Darshan have?

- Ans
- 1. 4
  - 2. 1
  - 3. 3
  - 4. 2

Question ID : 65497830631  
Status : Marked For Review  
Chosen Option : 4

Section : Part B General Knowledge and General Awareness

**Q.1** How many Articles and Schedules, respectively, were there in the Constitution of India in 2019?

- Ans
- 1. 398 and 6
  - 2. 395 and 8
  - 3. 392 and 7
  - 4. 396 and 8

Question ID : 65497830669  
Status : Answered  
Chosen Option : 4

**Q.2** Which of the following Indians made the country proud in Malaysia by being the fastest Indian to complete the Ironman Malaysia triathlon in record time?

- Ans
- 1. Hiren Patel
  - 2. Akshay Samel
  - 3. Arunaabh Shah
  - 4. Swaroop Singh Kuntal

Question ID : **65497830671**  
Status : **Not Answered**  
Chosen Option : --

**Q.3** Which process is used by the unicellular freshwater organisms and most plant cells to take in water?

- Ans
- 1. Morphogenesis
  - 2. Osmosis
  - 3. Hybridisation
  - 4. Tropism

Question ID : **65497830651**  
Status : **Answered**  
Chosen Option : **2**

**Q.4** As per FIFA Regulations, a football (soccer) match consists of two 45 minutes halves with a \_\_\_\_\_ rest period in between.

- Ans
- 1. 20 minutes
  - 2. 15 minutes
  - 3. 10 minutes
  - 4. 30 minutes

Question ID : **65497830674**  
Status : **Answered**  
Chosen Option : **3**

**Q.5** Which scientist among the following coined the term 'protoplasm' for the fluid substance of the cell?

- Ans
- 1. Leeuwenhoek
  - 2. Purkinje
  - 3. Virchow
  - 4. Schwann

Question ID : **65497830664**  
Status : **Answered**  
Chosen Option : **2**

**Q.6** Who among the following wrote the book 'India Wins Freedom' giving an insider's view of India's freedom struggle?

- Ans
- 1. Sardar Vallabhbhai Patel
  - 2. Dr. BR Ambedkar
  - 3. Jawaharlal Nehru
  - 4. Maulana Abul Kalam Azad

Question ID : **65497830654**  
Status : **Answered**  
Chosen Option : **4**

**Q.7 Who among the following was the first Indian Women Athlete to win a gold medal in any Asian Games?**

- Ans
- 1. Durba Banarjee
  - 2. Karnam Malleswari
  - 3. Arti Saha
  - 4. Kamaljeet Sandhu

Question ID : 65497830650  
Status : Answered  
Chosen Option : 4

**Q.8 Which of the following events occurred before the arrival of Simon Commission in India?**

- Ans
- 1. The First Round Table Conference
  - 2. Gandhi-Irwin Pact
  - 3. Quit India Movement
  - 4. Kakori Conspiracy

Question ID : 65497830661  
Status : Answered  
Chosen Option : 3

**Q.9 The aim of \_\_\_\_\_ is to promote the Panchayati Raj Institutions in the country.**

- Ans
- 1. the Constitution (Sixtieth Amendment) Act, 1988
  - 2. the Constitution (Forty-third Amendment) Act, 1977
  - 3. the Constitution (Seventy-third Amendment) Act, 1992
  - 4. the Constitution (Thirty-Seventh Amendment) Act, 1975

Question ID : 65497830656  
Status : Answered  
Chosen Option : 3

**Q.10 Who among the following won the Dada Saheb Phalke Award in 2020 for his documentary 'Chi Lupo'?**

- Ans
- 1. Kasinathuni Viswanath
  - 2. Kezang D Thongdok
  - 3. B Nagi Reddy
  - 4. Akkineni Nageswara Rao

Question ID : 65497830668  
Status : Answered  
Chosen Option : 2

**Q.11 Who among the following was the youngest umpire to enter the ICC Elite Panel in 2020?**

- Ans
- 1. Aleem Dar
  - 2. Nitin Menon
  - 3. Sundaram Ravi
  - 4. Nigel Llong

Question ID : 65497830653  
Status : Answered  
Chosen Option : 3

**Q.12 In how many phases was the General Election to the Legislative Assembly of Bihar 2020 conducted by the Election Commission of India?**

- Ans  1. Three  
 2. Two  
 3. Four  
 4. Five

Question ID : 65497830657  
Status : Answered  
Chosen Option : 3

**Q.13 Which of the following is a conventional source of energy?**

- Ans  1. Biogas  
 2. Wind energy  
 3. Solar energy  
 4. Firewood

Question ID : 65497830667  
Status : Answered  
Chosen Option : 3

**Q.14 Which of the following is a statistical tool that measures a country's overall achievement in terms of health, education and income?**

- Ans  1. Human development index  
 2. Per capita income  
 3. Life expectancy  
 4. Political stability

Question ID : 65497830659  
Status : Answered  
Chosen Option : 1

**Q.15 Who among the following introduced the 'Doctrine of Lapse'?**

- Ans  1. Lord Ripon  
 2. Warren Hastings  
 3. Lord Canning  
 4. Lord Dalhousie

Question ID : 65497830655  
Status : Answered  
Chosen Option : 4

**Q.16 Who among the following constructed the Jamat Khana Mosque in Delhi?**

- Ans  1. Quṭb al-Dīn Mubārak Shah  
 2. Jalal-ud-din Firuz Khilji  
 3. Ala-ud-din Khilji  
 4. Khizr Khan

Question ID : 65497830662  
Status : Answered  
Chosen Option : 3

Q.17 The property of metals to produce ringing sound on being struck with a hard object is known as \_\_\_\_\_.

- Ans
- 1. Malleability
  - 2. Ductility
  - 3. Opaque
  - 4. Sonorous

Question ID : 65497830663  
Status : Answered  
Chosen Option : 4

Q.18 What makes the soil fertile?

- Ans
- 1. Overabundance of acidic materials in the soil
  - 2. The right mix of minerals and inorganic matter
  - 3. The right mix of minerals and organic matter
  - 4. High levels of salt in the soil

Question ID : 65497830673  
Status : Answered  
Chosen Option : 3

Q.19 As of 2020, in which of the following cities is the headquarters of Axis Bank located?

- Ans
- 1. Ahmedabad
  - 2. Bengaluru
  - 3. Chennai
  - 4. Mumbai

Question ID : 65497830660  
Status : Answered  
Chosen Option : 4

Q.20 Which of the following sports personalities won the Rajiv Gandhi Khel Ratna Award 2020?

- Ans
- 1. Vishesh Bhriguvanshi
  - 2. Dharmendra Tiwary
  - 3. Mariyappan Thangavelu
  - 4. Vijay Bhalchandra Munishwar

Question ID : 65497830670  
Status : Answered  
Chosen Option : 3

Q.21 Devprayag is the place where the Bhagirathi joins \_\_\_\_\_.

- Ans
- 1. Ghaghara
  - 2. Meghna
  - 3. Gandak
  - 4. Alaknanda

Question ID : 65497830658  
Status : Answered  
Chosen Option : 4

**Q.22** \_\_\_\_\_ is an asset that the borrower owns and uses as a guarantee to a lender, until the loan is repaid.

- Ans**
- 1. Accessory
  - 2. Ancillary
  - 3. Bail
  - 4. Collateral

Question ID : 65497830672  
Status : Answered  
Chosen Option : 1

**Q.23** What are the two languages in which the Kandahar Bilingual Rock Inscriptions were written?

- Ans**
- 1. Arabic and Greek
  - 2. Persian and Aramaic
  - 3. Greek and Aramaic
  - 4. Greek and Prakrit

Question ID : 65497830666  
Status : Answered  
Chosen Option : 2

**Q.24** Who among the following was the successor of Chandragupta I?

- Ans**
- 1. Vikramaditya
  - 2. Samudragupta
  - 3. Chandragupta II
  - 4. Ghatotkacha

Question ID : 65497830652  
Status : Answered  
Chosen Option : 4

**Q.25** Who authored the book 'Voices of Dissent' published in October 2020?

- Ans**
- 1. Arjun Anand
  - 2. Arundhati Roy
  - 3. Sarbpreet Singh
  - 4. Romila Thapar

Question ID : 65497830665  
Status : Not Attempted and Marked For Review  
Chosen Option : --

## Section : Part C Elementary Mathematics

**Q.1** A can complete  $\frac{2}{3}$  of a work in 10 days and B can complete  $\frac{4}{5}$  of the same work in 8 days. They work together for 5 days. The remaining work is completed by C alone in 6 days. In how many days C alone can complete 75% of the same work?

- Ans**
- 1. 27
  - 2. 36
  - 3. 18
  - 4. 30

Question ID : 65497830683  
Status : Answered

**Q.2** An electric heater was sold at a profit of 12%. If its cost had been 5% less and it had been sold for ₹180 less, the profit would have been 10%. What is the cost price of the electric heater?

- Ans**
- 1. ₹2,250
  - 2. ₹2,380
  - 3. ₹2,400
  - 4. ₹2,000

Question ID : 65497830675  
Status : Answered  
Chosen Option : 3

**Q.3** The price of sugar rises by 33%. By what percent should a family reduce the consumption of sugar, so as NOT to increase the expenditure?

- Ans**
- 1. 30
  - 2. 24.8
  - 3. 29.8
  - 4. 33

Question ID : 65497830693  
Status : Answered  
Chosen Option : 2

**Q.4** A cistern has a leak which would empty it in 6 hours. A tap is turned on which admits 10 litres of water per minute into the cistern. When it is full it now emptied in 10 hours. What is the capacity (in litres) of the cistern?

- Ans**
- 1. 8000
  - 2. 9000
  - 3. 8500
  - 4. 10000

Question ID : 65497830694  
Status : Answered  
Chosen Option : 2

**Q.5** Two ropes, one 8 m long and the other 14 m long are to be cut into pieces of the same length. What will the maximum possible length of each piece be?

- Ans**
- 1. 1 m
  - 2. 4 m
  - 3. 2 m
  - 4. 6 m

Question ID : 65497830684  
Status : Answered  
Chosen Option : 4



**Q.6** If the radius and the height of a circular cylinder are 10 cm and 15 cm, respectively, and the radius of a sphere is 5 cm, then what is the ratio of the curved surface area of the cylinder to that of the sphere?

- Ans**
- 1. 3 : 2
  - 2. 5 : 1
  - 3. 3 : 1
  - 4. 1 : 3

Question ID : 65497830680  
Status : Answered  
Chosen Option : 3

**Q.7** The capacities of two hemispherical vessels are 2.7 litres and 12.5 litres. Find the ratio of the areas of the inner curved surfaces of the vessels.

- Ans**
- 1. 3 : 5
  - 2. 5 : 3
  - 3. 2 : 1
  - 4. 1 : 2

Question ID : 65497830699  
Status : Answered  
Chosen Option : 1

**Q.8** The ratio of the number of girls and boys in a school is 8 : 7. If the percentage increase in the number of girls and boys is 10% and 20%, respectively, what will be the new ratio?

- Ans**
- 1. 14 : 19
  - 2. 22 : 21
  - 3. 20 : 23
  - 4. 13 : 11

Question ID : 65497830697  
Status : Answered  
Chosen Option : 2

**Q.9** When 55 is subtracted from a number, it reduces to its 80%. Find four-fifth of the original number.

- Ans**
- 1. 240
  - 2. 220
  - 3. 210
  - 4. 180

Question ID : 65497830685  
Status : Answered  
Chosen Option : 2

**Q.10** A shopkeeper bought 60 kg of rice at ₹42 per kg and mixed it with 120 kg rice at ₹52 per kg. At what rate (₹ per kg) should he sell the mixture to gain 20%?

- Ans**
- 1. ₹ 53.25
  - 2. ₹ 54.82
  - 3. ₹ 58.40
  - 4. ₹ 55.50

Question ID : 65497830696  
Status : Answered

**Q.11** An article was sold for ₹8800 which is  $\frac{5}{7}$  of its cost price. The loss per cent is:

- Ans**
- 1.  $31\frac{6}{7}\%$
  - 2.  $28\frac{4}{7}\%$
  - 3.  $22\frac{5}{7}\%$
  - 4.  $12\frac{3}{7}\%$

Question ID : 65497830682  
Status : Answered  
Chosen Option : 2

**Q.12** Mukul lent ₹9,300 on simple interest in two parts. He earned interest at 5% per annum on the first part and at 8% per annum on the second part. The total interest he received after 4 years is ₹2,400. What is the ratio of the money lent at 5% to that lent at 8%?

- Ans**
- 1. 5 : 8
  - 2. 8 : 5
  - 3. 15 : 16
  - 4. 16 : 15

Question ID : 65497830676  
Status : Answered  
Chosen Option : 4

**Q.13** If  $x : y = 5 : 2$ , then what is  $(8x - 9y) : (14x - 13y)$ ?

- Ans**
- 1. 37 : 29
  - 2. 29 : 37
  - 3. 1 : 2
  - 4. 2 : 1

Question ID : 65497830679  
Status : Answered  
Chosen Option : 3

**Q.14** If the difference between the simple interest and compound interest on a sum of money invested for 2 years at the rate of 15% per annum (interest compounded annually) is ₹225, then what is the sum?

- Ans**
- 1. ₹8,000
  - 2. ₹9,500
  - 3. ₹10,000
  - 4. ₹9,000

Question ID : 65497830689  
Status : Answered  
Chosen Option : 3

**Q.15** A man covers a certain distance at a speed of 60 km/h and returns at a speed of 40 km/h. What is his average speed (in km/h) for the entire journey?

- Ans**
- 1. 48
  - 2. 40
  - 3. 12
  - 4. 50

Question ID : 65497830678  
Status : Answered  
Chosen Option : 1

**Q.16** The ratio of the monthly incomes of Ramu and Somu is 6 : 5 and the ratio of their expenditures is 7 : 6. At the end of the month, Ramu and Somu save ₹1,500 and ₹1,000, respectively. What is Ramu's monthly income?

- Ans**
- 1. ₹24,000
  - 2. ₹18,000
  - 3. ₹14,000
  - 4. ₹12,000

Question ID : 65497830688  
Status : Answered  
Chosen Option : 4

**Q.17** If the average of the numbers 5, 7, 9, 12, 13, t, 20 is t, then what is the value of t?

- Ans**
- 1. 10
  - 2. 11
  - 3. 15
  - 4. 18

Question ID : 65497830687  
Status : Answered  
Chosen Option : 2

**Q.18** The value of  $\frac{3}{4} \div \frac{3}{4}$  of  $\frac{3}{4} \times \frac{4}{3} + \frac{5}{2} \div \frac{2}{5}$  of  $\frac{5}{4} - \left(\frac{2}{3} - \frac{2}{3}\right)$  of  $\frac{5}{6}$  is:

- Ans**
- 1.  $\frac{10}{3}$
  - 2.  $\frac{11}{3}$
  - 3.  $\frac{20}{3}$
  - 4.  $\frac{22}{3}$

Question ID : 65497830681  
Status : Answered  
Chosen Option : 3

**Q.19** What will be single discount equivalent to three successive discounts of 50%, 30%, and 20%?

- Ans**
- 1. 68%
  - 2. 72%
  - 3. 75%
  - 4. 70%

Question ID : **65497830691**  
 Status : **Answered**  
 Chosen Option : **2**

**Q.20** The mean of 15 measurements was calculated to be 50 cm. But it was found that one of the measurements was recorded as 46 cm instead of 61 cm. What is the correct mean (in cm)?

- Ans**
- 1. 53
  - 2. 52
  - 3. 55
  - 4. 51

Question ID : **65497830690**  
 Status : **Answered**  
 Chosen Option : **4**

**Q.21** Simplify the following expression.

$$\frac{\frac{3}{4} \text{ of } 1\frac{3}{5} - 1 \times 5 + 2}{24 - 6 \times 2} \div 4$$

- Ans**
- 1.  $-\frac{3}{80}$
  - 2.  $-\frac{1}{192}$
  - 3.  $-\frac{29}{720}$
  - 4.  $-\frac{29}{240}$

Question ID : **65497830677**  
 Status : **Answered**  
 Chosen Option : **4**

**Q.22** If the difference between two numbers is 42 and their LCM and HCF are 1729 and 7, respectively, what is the sum of those two numbers?

- Ans**
- 1. 390
  - 2. 244
  - 3. 420
  - 4. 224

Question ID : **65497830686**  
 Status : **Answered**  
 Chosen Option : **4**

**Q.23** The interest on a certain deposit at 3.5% per annum will be ₹210 in one year. How much will the additional interest in one year be on the same deposit at 4% per annum?

- Ans**
- ✓ 1. ₹30
  - ✗ 2. ₹49
  - ✗ 3. ₹45
  - ✗ 4. ₹36

Question ID : 65497830698  
Status : Answered  
Chosen Option : 3

**Q.24** The list price of an article is ₹15,000. A trader wants to buy it. He has to choose one out of two discount series — one is 45%, 3%, and 2% and the other is 25%, 12% and 13% — on the list price. How many rupees can he save by choosing right series?

- Ans**
- ✓ 1. ₹770.55
  - ✗ 2. ₹771.55
  - ✗ 3. ₹773.55
  - ✗ 4. ₹772.55

Question ID : 65497830692  
Status : Answered  
Chosen Option : 4

**Q.25** A car starts at a speed of 80 km/h, with its speed increasing by 8 km/h every two hours. In how many hours will it cover 432 km?

- Ans**
- ✗ 1. 6 hours 30 minutes
  - ✗ 2. 5 hours 30 minutes
  - ✓ 3. 5 hours
  - ✗ 4. 6 hours

Question ID : 65497830695  
Status : Answered  
Chosen Option : 1

Section : Part D English

**Q.1** Select the INCORRECTLY spelt word.

- Ans**
- ✓ 1. Flavure
  - ✗ 2. Figure
  - ✗ 3. Leisure
  - ✗ 4. Future

Question ID : 65497830703  
Status : Answered  
Chosen Option : 1

Q.2 Select the most appropriate ANTONYM of the given word.

Loathe

- Ans  1. Detest  
 2. Admire  
 3. Abhor  
 4. Despise

Question ID : 65497830716  
Status : Answered  
Chosen Option : 2

Q.3 Select the most appropriate ANTONYM of the given word.

Beneath

- Ans  1. Below  
 2. Above  
 3. Beyond  
 4. Under

Question ID : 65497830701  
Status : Answered  
Chosen Option : 2

Q.4 Select the most appropriate option that can substitute the underlined segment in the given sentence. If there is no need to substitute it, select 'No substitution required'.

Karan looked everywhere for the pen-drive but could not find it.

- Ans  1. but had not find it  
 2. No substitution required  
 3. but could not finding it  
 4. but could not found it

Question ID : 65497830707  
Status : Answered  
Chosen Option : 2

Q.5 The following sentence has been divided into parts. One of them may contain an error. Select the part that contains the error from the given options. If you don't find any error, mark 'No error' as your answer.

Unless you don't / work hard, / you will fail.

- Ans  1. you will fail  
 2. No error  
 3. Unless you don't  
 4. work hard

Question ID : 65497830700  
Status : Answered  
Chosen Option : 3

**Q.6** Select the most appropriate meaning of the given idiom.

**Blow a fuse**

- Ans**
- 1. To feel tired
  - 2. To feel sick
  - 3. To work hard aimlessly
  - 4. To react very angrily

Question ID : 65497830717

Status : Answered

Chosen Option : 4

**Q.7** Select the option that can be used as a one-word substitute for the given group of words.

**A person who is excessively conceited and self-absorbed**

- Ans**
- 1. Fraud
  - 2. Cheater
  - 3. Egotist
  - 4. Deceiver

Question ID : 65497830713

Status : Answered

Chosen Option : 3

**Q.8** Select the most appropriate meaning of the given idiom.

**The apple of one's eye**

- Ans**
- 1. Someone very rich
  - 2. A person who is very dear
  - 3. A jolly fellow
  - 4. A fierce opponent

Question ID : 65497830710

Status : Answered

Chosen Option : 2

**Q.9** Select the most appropriate synonym of the given word.

**Radical**

- Ans**
- 1. Superficial
  - 2. Minor
  - 3. Profound
  - 4. Conservative

Question ID : 65497830712

Status : Answered

Chosen Option : 2

Q.10 Select the most appropriate option to fill in the blank.

The new employee said that he was \_\_\_\_\_ of doing the job well.

- Ans
- 1. sufficient
  - 2. diffident
  - 3. confident
  - 4. efficient

Question ID : 65497830718  
Status : Answered  
Chosen Option : 4

Q.11 Select the most appropriate option that can substitute the underlined segment in the given sentence. If there is no need to substitute it, select 'No substitution required'.

Overexposure to the sun while sunbathing not only results in sunburns but also causes premature aging.

- Ans
- 1. No substitution required
  - 2. for sunbathing
  - 3. as sunbathing
  - 4. ever sunbathing

Question ID : 65497830719  
Status : Answered  
Chosen Option : 1

Q.12 Select the most appropriate option that can substitute the underlined word in the given sentence.

When you give away a secret or an advantage, you reveal a secret or suspension that you should have kept to yourself.

- Ans
- 1. information
  - 2. dereliction
  - 3. revolution
  - 4. benediction

Question ID : 65497830704  
Status : Answered  
Chosen Option : 1

Q.13 Select the INCORRECTLY spelt word.

- Ans
- 1. Dictate
  - 2. Dictionery
  - 3. Difference
  - 4. Decision

Question ID : 65497830714  
Status : Answered  
Chosen Option : 2



**Q.14** The following sentence has been split into four segments. Identify the segment that contains a grammatical error.

Eighty rupees are / too much for / this leather bag, / which is looking so old.

- Ans
- 1. too much for
  - 2. this leather bag
  - 3. Eighty rupees are
  - 4. which is looking so old

Question ID : 65497830705  
Status : Answered  
Chosen Option : 3

**Q.15** Select the most appropriate option to fill in the blank.

Editing involves \_\_\_\_\_ and correction with an intention to produce accurate work.

- Ans
- 1. habitation
  - 2. modification
  - 3. fortification
  - 4. modulation

Question ID : 65497830715  
Status : Answered  
Chosen Option : 2

**Q.16** Select the option that can be used as a one-word substitute for the given group of words.

Comparison between things that have similar features

- Ans
- 1. Resemblance
  - 2. Contrast
  - 3. Analogy
  - 4. Description

Question ID : 65497830708  
Status : Answered  
Chosen Option : 2

**Q.17** Select the most appropriate option to fill in the blank.

He applied for official \_\_\_\_\_ to organise the event.

- Ans
- 1. agreement
  - 2. provision
  - 3. authority
  - 4. permission

Question ID : 65497830709  
Status : Answered  
Chosen Option : 4

**Q.18** Parts of the given sentence have been given as options. One of them contains a grammatical error. Select the option that has the error.

Her friends house is close to the high school where Sarathi teaches.

- Ans
- 1. the high school
  - 2. Her friends
  - 3. teaches
  - 4. close to

Question ID : 65497830711  
Status : Answered  
Chosen Option : 2

**Q.19** Select the most appropriate synonym of the given word.

Competent

- Ans
- 1. Compat ble
  - 2. Capable
  - 3. Comfortable
  - 4. Comparable

Question ID : 65497830706  
Status : Answered  
Chosen Option : 1

**Q.20** Select the option that can be used as a one-word substitute for the given group of words.

Words carved on a stone or monument

- Ans
- 1. Transcription
  - 2. Inscription
  - 3. Prescription
  - 4. Subscription

Question ID : 65497830702  
Status : Answered  
Chosen Option : 2

**Comprehension:**

In the following passage, some words have been deleted. Read the passage carefully and select the most appropriate option to fill in each blank.

It has always been (1)\_\_\_\_\_ dream to live (2)\_\_\_\_\_ Northbrook Villa. My cousins have been (3)\_\_\_\_\_ there since a long time. The place is (4)\_\_\_\_\_ ten kilometres away from my school. I hope father will agree (5)\_\_\_\_\_ shifting there.

**SubQuestion No : 21**

**Q.21** Select the most appropriate option to fill in blank number 1.

- Ans
- 1. my
  - 2. me
  - 3. mine
  - 4. myself

Question ID : 65497830721  
Status : Answered  
Chosen Option : 1

## Comprehension:

In the following passage, some words have been deleted. Read the passage carefully and select the most appropriate option to fill in each blank.

It has always been (1)\_\_\_\_\_ dream to live (2)\_\_\_\_\_ Northbrook Villa. My cousins have been (3)\_\_\_\_\_ there since a long time. The place is (4)\_\_\_\_\_ ten kilometres away from my school. I hope father will agree (5)\_\_\_\_\_ shifting there.

### SubQuestion No : 22

**Q.22** Select the most appropriate option to fill in blank number 2.

- Ans  1. among  
 2. to  
 3. in  
 4. from

Question ID : 65497830722

Status : Answered

Chosen Option : 3

## Comprehension:

In the following passage, some words have been deleted. Read the passage carefully and select the most appropriate option to fill in each blank.

It has always been (1)\_\_\_\_\_ dream to live (2)\_\_\_\_\_ Northbrook Villa. My cousins have been (3)\_\_\_\_\_ there since a long time. The place is (4)\_\_\_\_\_ ten kilometres away from my school. I hope father will agree (5)\_\_\_\_\_ shifting there.

### SubQuestion No : 23

**Q.23** Select the most appropriate option to fill in blank number 3.

- Ans  1. left  
 2. live  
 3. living  
 4. lived

Question ID : 65497830723

Status : Answered

Chosen Option : 3

## Comprehension:

In the following passage, some words have been deleted. Read the passage carefully and select the most appropriate option to fill in each blank.

It has always been (1)\_\_\_\_\_ dream to live (2)\_\_\_\_\_ Northbrook Villa. My cousins have been (3)\_\_\_\_\_ there since a long time. The place is (4)\_\_\_\_\_ ten kilometres away from my school. I hope father will agree (5)\_\_\_\_\_ shifting there.

### SubQuestion No : 24

**Q.24** Select the most appropriate option to fill in blank number 4.

- Ans  1. adjectively  
 2. advertently  
 3. approximately  
 4. ambivalently

Question ID : 65497830724

Status : Answered

Chosen Option : 3

## Comprehension:

In the following passage, some words have been deleted. Read the passage carefully and select the most appropriate option to fill in each blank.

It has always been (1)\_\_\_\_\_ dream to live (2)\_\_\_\_\_ Northbrook Villa. My cousins have been (3)\_\_\_\_\_ there since a long time. The place is (4)\_\_\_\_\_ ten kilometres away from my school. I hope father will agree (5)\_\_\_\_\_ shifting there.

### SubQuestion No : 25

Q.25 Select the most appropriate option to fill in blank number 5.

- Ans  1. out  
 2. to  
 3. from  
 4. at

Question ID : 65497830725  
Status : Answered  
Chosen Option : 4

## Section : Part D Hindi

Q.1 दिए गए वाक्य का वह भाग ज्ञात करें जिसमें कोई त्रुटि है। यदि कोई त्रुटि नहीं है, तो 'कोई त्रुटि नहीं है' चुनें।

गले को (1)/ पराधीनता की (2) /बेड़ियाँ पड़ी रही हैं। (3)/ कोई त्रुटि नहीं है (4)

- Ans  1. 1  
 2. 4  
 3. 2  
 4. 3

Question ID : 65497830726  
Status : Not Answered  
Chosen Option : --

Q.2 'एक काम से दोहरा लाभ प्राप्त करना' यह किस मुहावरे का अर्थ है?

- Ans  1. एक ढेले से दो चिड़िया मारना  
 2. एक थैली के चट्टे-बट्टे होना  
 3. एक पर एक होना  
 4. एक तरकश के तीर होना

Question ID : 65497830729  
Status : Not Answered  
Chosen Option : --

Q.3 दिये गये वाक्य के किस भाग में त्रुटि है?

वह एक आवश्यकीय कार्य से बाहर गया है।

- Ans  1. आवश्यकीय कार्य  
 2. से बाहर  
 3. गया है।  
 4. वह एक

Question ID : 65497830741  
Status : Not Answered  
Chosen Option : --

Q.4 तीन वर्षों में होनेवाली- रेखांकित वाक्यांश के लिए एक शब्द का चयन कीजिए-

- Ans  1. त्रैवार्षिक  
 2. मासिक  
 3. अर्धवार्षिक  
 4. वार्षिक

Question ID : 65497830743  
Status : Not Answered  
Chosen Option : --

Q.5 दिए गए वाक्य का वह भाग ज्ञात करें जिसमें कोई त्रुटि है। यदि कोई त्रुटि नहीं है, तो 'कोई त्रुटि नहीं' विकल्प को चुनें।

झूठ बोलना उसका आदत बन गई है।

- Ans  1. उसका आदत  
 2. कोई त्रुटि नहीं  
 3. झूठ बोलना  
 4. बन गई

Question ID : 65497830730  
Status : Not Answered  
Chosen Option : --

Q.6 रिक्त स्थान की पूर्ति के लिए सबसे उपयुक्त शब्द का चयन करें।

अब भारत में भी गगनचुम्बी \_\_\_\_\_ का निर्माण होने लगा है।

- Ans  1. भुवनो  
 2. भावन  
 3. भावों  
 4. भवनो

Question ID : 65497830745  
Status : Not Answered  
Chosen Option : --

Q.7 दिए गए वाक्य में रेखांकित खंड को प्रतिस्थापित करने के लिए सबसे उपयुक्त विकल्प का चयन करें। यदि इसे प्रतिस्थापित करने की आवश्यकता नहीं है, तो विकल्प 'किसी बदलाव की आवश्यकता नहीं है' का चयन करें।

साहित्य और जीवन का घोर सबध है।

- Ans  1. आत्मीय सबध है।  
 2. अनिष्ट सबध है।  
 3. अभिन्न सबध है।  
 4. किसी बदलाव की आवश्यकता नहीं है।

Question ID : 65497830739  
Status : Not Answered  
Chosen Option : --

Q.8 मुमुक्षु - रेखांकित शब्द के लिए वाक्यांश का चयन कीजिए-

- Ans  1. जो मोक्ष चाहता हो  
 2. जो बहुत ही भूखा हो  
 3. जो सुन्दर हो  
 4. जो चक्रधारण करता है

Question ID : 65497830744  
Status : Not Answered  
Chosen Option : --

Q.9 सही वर्तनी वाले शब्द का चयन करें।

- Ans  1. क्रिपया  
 2. कृप्या  
 3. क्रिईष्य  
 4. कृपया

Question ID : 65497830737  
Status : Not Answered  
Chosen Option : --

Q.10 'विद्युत' का पर्यायवाची है-

- Ans  1. तरिणी  
 2. आपगा  
 3. वनिता  
 4. चपला

Question ID : 65497830742  
Status : Not Answered  
Chosen Option : --

Q.11 सही वर्तनी वाले शब्द का चयन करें।

- Ans  1. आस्तित्व  
 2. अस्तीत्व  
 3. अस्तित्व  
 4. आस्तितावा

Question ID : 65497830738  
Status : Not Answered  
Chosen Option : --

Q.12 रिक्त स्थान की पूर्ति के लिए सबसे उपयुक्त शब्द का चयन करें-

सेवा \_\_\_\_\_ भाव से करनी चाहिए।

- Ans  1. आलस  
 2. निःस्वार्थ  
 3. स्वार्थ  
 4. सजग

Question ID : 65497830735  
Status : Not Answered  
Chosen Option : --

Q.13 दिए गए वाक्य में रेखांकित खंड को प्रतिस्थापित करने के लिए सबसे उपयुक्त विकल्प का चयन करें।  
यदि इसे प्रतिस्थापित करने की आवश्यकता नहीं है, तो विकल्प 'किसी बदलाव की आवश्यकता नहीं है'  
का चयन करें।

उसकी अद्वैतदर्शिता के कारण परिवार पर लाखों के कर्ज़ हो गया।

- Ans
- 1. परिवारो पर लाखों के कर्ज़ हो गया ।
  - 2. परिवार पर लाखों के कर्ज़ हो गये ।
  - 3. किसी बदलाव की आवश्यकता नहीं है।
  - 4. परिवार पर लाखों का कर्ज़ हो गया ।

Question ID : 65497830734

Status : Not Answered

Chosen Option : --

Q.14 रिक्त स्थान की पूर्ति के लिए सबसे उपयुक्त शब्द का चयन करें।

उसने अपने विवाह के \_\_\_\_\_ में पार्टी दी।

- Ans
- 1. उपलक्ष्य
  - 2. समय
  - 3. लिए
  - 4. अवसर

Question ID : 65497830736

Status : Not Answered

Chosen Option : --

Q.15 दिए गए शब्द के समानार्थी शब्द का चयन कीजिए।

शिकारी

- Ans
- 1. आखेटक
  - 2. आखेट
  - 3. अहेर
  - 4. मृगया

Question ID : 65497830727

Status : Not Answered

Chosen Option : --

Q.16 कौनसा विलोम-युग्म सुमेलित नहीं है?

- Ans
- 1. भूगोल-खगोल
  - 2. अनुराग-विराग
  - 3. जय-पराजय
  - 4. शुभ-अनिष्ट

Question ID : 65497830728

Status : Not Answered

Chosen Option : --

Q.17 दिए गये वाक्यांश के लिए एक शब्द दीजिये-

जो सब काम अपने भरोसे करता हो

- Ans
- 1. पराधीन
  - 2. स्वतंत्र
  - 3. परावलंबी
  - 4. स्वावलंबी

Question ID : 65497830733  
Status : Not Answered  
Chosen Option : --

Q.18 उस विकल्प का चयन कीजिए, जो निम्न मुहावरे का सही अर्थ व्यक्त करता है।

हुक्का-पानी बंद करना

- Ans
- 1. हुक्का पीना
  - 2. डर जाना
  - 3. चकित करना
  - 4. जाति से निकालना

Question ID : 65497830740  
Status : Not Answered  
Chosen Option : --

Q.19 निम्न वाक्यांश के लिए उचित शब्द का चयन कीजिए।

भक्तों पर कृपा और प्रेम रखनेवाला

- Ans
- 1. भक्त
  - 2. राष्ट्रप्रेमी
  - 3. भक्त वत्सल
  - 4. प्रार्थी

Question ID : 65497830732  
Status : Not Answered  
Chosen Option : --

Q.20 दिए गए शब्द का विलोम चुनिए।

ऐहिक

- Ans
- 1. नैसर्गिक
  - 2. सात्विक
  - 3. पारलौकिक
  - 4. अलौकिक

Question ID : 65497830731  
Status : Not Answered  
Chosen Option : --



**Comprehension:**

दिए गए गद्यांश में से कुछ शब्द हटा दिए गए हैं। इसपर आधारित प्रश्नों में प्रत्येक सख्या के लिए सबसे उपयुक्त विकल्प का चयन करें।

सड़कें (1) \_\_\_\_\_ हैं। गदा पानी गली-गली में (2) \_\_\_\_\_। बराबर (3) \_\_\_\_\_ दी जा रही है कि शहर को (4) \_\_\_\_\_ रखें। फटी, खुली चीजें मत खाओ। पर (5) \_\_\_\_\_ सुनता है?

**SubQuestion No : 21**

Q.21 गद्यांश के रिक्त स्थान (1) के लिए सर्वाधिक उपयुक्त शब्द होगा-

- Ans  1. गदी  
 2. चौड़ा  
 3. साफ  
 4. सुथरे

Question ID : 65497830747

Status : Not Answered

Chosen Option : --

**Comprehension:**

दिए गए गद्यांश में से कुछ शब्द हटा दिए गए हैं। इसपर आधारित प्रश्नों में प्रत्येक सख्या के लिए सबसे उपयुक्त विकल्प का चयन करें।

सड़कें (1) \_\_\_\_\_ हैं। गदा पानी गली-गली में (2) \_\_\_\_\_। बराबर (3) \_\_\_\_\_ दी जा रही है कि शहर को (4) \_\_\_\_\_ रखें। फटी, खुली चीजें मत खाओ। पर (5) \_\_\_\_\_ सुनता है?

**SubQuestion No : 22**

Q.22 गद्यांश के रिक्त स्थान (2) के लिए सर्वाधिक उपयुक्त शब्द होगा-

- Ans  1. मच गयी है  
 2. बह रही है  
 3. गिर रहे हैं  
 4. फैल रहा है

Question ID : 65497830748

Status : Not Answered

Chosen Option : --

**Comprehension:**

दिए गए गद्यांश में से कुछ शब्द हटा दिए गए हैं। इसपर आधारित प्रश्नों में प्रत्येक सख्या के लिए सबसे उपयुक्त विकल्प का चयन करें।

सड़कें (1) \_\_\_\_\_ हैं। गदा पानी गली-गली में (2) \_\_\_\_\_। बराबर (3) \_\_\_\_\_ दी जा रही है कि शहर को (4) \_\_\_\_\_ रखें। फटी, खुली चीजें मत खाओ। पर (5) \_\_\_\_\_ सुनता है?

**SubQuestion No : 23**

Q.23 गद्यांश के रिक्त स्थान (3) के लिए सर्वाधिक उपयुक्त शब्द होगा-

- Ans  1. औषधी  
 2. खबर  
 3. सतर्क  
 4. चेतावनी

Question ID : 65497830749

Status : Not Answered

Chosen Option : --

**Comprehension:**

दिए गए गद्यांश में से कुछ शब्द हटा दिए गए हैं। इसपर आधारित प्रश्नों में प्रत्येक सख्या के लिए सबसे उपयुक्त विकल्प का चयन करें।

सड़कें (1) \_\_\_\_\_ हैं। गदा पानी गली-गली में (2) \_\_\_\_\_। बराबर (3) \_\_\_\_\_ दी जा रही है कि शहर को (4) \_\_\_\_\_ रखें। फटी, खुली चीजें मत खाओ। पर (5) \_\_\_\_\_ सुनता है?

**SubQuestion No : 24**

Q.24 गद्यांश के रिक्त स्थान (4) के लिए सर्वाधिक उपयुक्त शब्द होगा-

- Ans  1. साफ-सुथरा  
 2. कूड़ा  
 3. गदगी  
 4. मेला

Question ID : 65497830750

Status : Not Answered

Chosen Option : --

**Comprehension:**

दिए गए गद्यांश में से कुछ शब्द हटा दिए गए हैं। इसपर आधारित प्रश्नों में प्रत्येक सख्या के लिए सबसे उपयुक्त विकल्प का चयन करें।

सड़कें (1) \_\_\_\_\_ हैं। गदा पानी गली-गली में (2) \_\_\_\_\_। बराबर (3) \_\_\_\_\_ दी जा रही है कि शहर को (4) \_\_\_\_\_ रखें। फटी, खुली चीजें मत खाओ। पर (5) \_\_\_\_\_ सुनता है?

**SubQuestion No : 25**

Q.25 गद्यांश के रिक्त स्थान (5) के लिए सर्वाधिक उपयुक्त शब्द होगा-

- Ans  1. यह  
 2. किसने  
 3. कौन  
 4. वह

Question ID : 65497830751

Status : Not Answered

Chosen Option : --