

**SSC
GD**

Previous Year Paper
15 Dec 2021 Shift 3
English



सत्यमेव जयते

Exam Date	15/12/2021
Exam Time :	4:00 PM - 5:30 PM
Subject	Constable GD 2021

Section : Part A General Intelligence and Reasoning

Q.1 Select the option in which the numbers are related in the same way as are the numbers in the given set.

(15, 48, 98)

- Ans 1. (21, 66, 134)
 2. (18, 58, 101)
 3. (24, 74, 150)
 4. (17, 55, 105)

Question ID : 65497834818
Status : Not Answered
Chosen Option : --

Q.2 Select the option that is related to the third letter-cluster in the same way as the second letter-cluster is related to the first letter-cluster.

IMR : VRM :: FJO : ?

- Ans 1. TPJ
 2. TRL
 3. SOJ
 4. TPK

Question ID : 65497834838
Status : Answered
Chosen Option : 3

Q.3 Select the combination of letters that when sequentially placed in the blanks of the given series will complete the series.

E J _ F K _ _ _ Q H _ _ I _ S

- Ans 1. RLMOPGN
 2. GOMRNLP
 3. OPGLMRN
 4. PGRNMOL

Question ID : 65497834830
Status : Answered
Chosen Option : 3

Q.4 If 'ORCHID' is known as 'DAISY', 'DAISY' is known as 'LOTUS', 'LOTUS' is known as 'JASMINE' and 'JASMINE' is known as 'TULIP', then what is the national flower of India?

- Ans
- 1. DAISY
 - 2. TULIP
 - 3. LOTUS
 - 4. JASMINE

Question ID : 65497834839
Status : Answered
Chosen Option : 4

Q.5 Four letter-clusters have been given, out of which three are alike in some manner and one is different. Select the letter-cluster that is different.

- Ans
- 1. ABEJ
 - 2. UCGK
 - 3. OPSX
 - 4. EFIN

Question ID : 65497834825
Status : Answered
Chosen Option : 2

Q.6 In a certain code language, 'DECK' is written as 'EGFO'. How will 'FINDER' be written in that language?

- Ans
- 1. GJODFS
 - 2. GKQHJX
 - 3. GKPFGU
 - 4. GHOGIX

Question ID : 65497834816
Status : Answered
Chosen Option : 2

Q.7 Select the correct mirror image of the given combination when the mirror is placed at 'PQ' as shown.

NAHARIA
P
|
Q

- Ans
- 1. AIRAHAI
 - 2. AIRAHAI
 - 3. NAHARIA
 - 4. AHAIARIA

Question ID : 65497834828
Status : Answered
Chosen Option : 2

Q.8 Anuj's salary is twice the salary of Manoj. Ramnathan's salary is half the salary of Vikram. Manoj's salary is ₹15,000 less than the salary of Ramnathan. If the salary of Anuj is ₹20,000, what is the total salary of all the four persons?

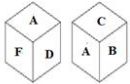
- Ans
- 1. ₹1,30,000
 - 2. ₹1,00,000
 - 3. ₹1,05,000
 - 4. ₹1,15,000

Question ID : 65497834819

Status : Answered

Chosen Option : 3

Q.9 Two different positions of the same dice are shown, the six faces of which are marked with the letters A to F. Select the letter that will be on the face opposite to the one having A.



- Ans
- 1. C
 - 2. B
 - 3. E
 - 4. F

Question ID : 65497834836

Status : Answered

Chosen Option : 3

Q.10 If '-' stands for '+', '+' stands for 'x', '÷' stands for '-' and 'x' stands for '+', then $80 - 20 + 10 \div 8 \times 10$ is equal to:

- Ans
- 1. 42
 - 2. 45
 - 3. 78
 - 4. 68

Question ID : 65497834835

Status : Answered

Chosen Option : 1

Q.11 In a code language, SHOT is coded as 3881540. How will WINE be coded in that language?

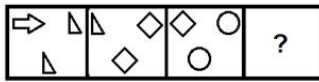
- Ans
- 1. 4615137
 - 2. 3231592
 - 3. 4610412
 - 4. 4691410

Question ID : 65497834826

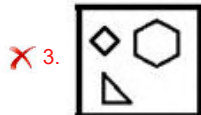
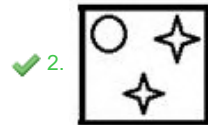
Status : Answered

Chosen Option : 4

Q.12 Select the figure from among the given options that can replace the question mark (?) in the following series.



Ans

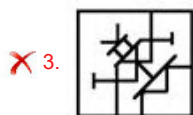
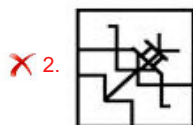
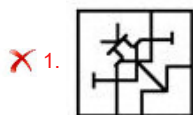


Question ID : 65497834832
 Status : Answered
 Chosen Option : 2

Q.13 Select the option in which the given figure is embedded (rotation is NOT allowed).



Ans



Question ID : 65497834837
 Status : Answered
 Chosen Option : 4

Q.14 Select the number from among the given options that can replace the question mark (?) in the following series.

5, 7, 14, 16, 32, ?

Ans 1. 34

2. 48

3. 36

4. 64

Question ID : 65497834831

Status : Answered

Chosen Option : 1

Q.15 Select the option that is related to the third word in the same way as the second word is related to the first word.

Dog : Bark :: Bird : ?

Ans 1. Chirp

2. Croak

3. Bleat

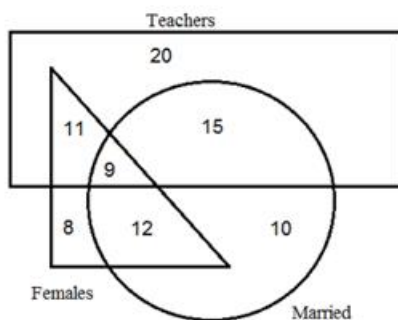
4. Growl

Question ID : 65497834822

Status : Not Answered

Chosen Option : --

Q.16 Study the given diagram carefully and answer the question that follows.



What is the number of female teachers who are NOT married?

Ans 1. 8

2. 11

3. 12

4. 9

Question ID : 65497834824

Status : Answered

Chosen Option : 2

Q.17 Select the correct option that indicates the arrangement of the given words in the order in which they appear in an English dictionary.

1. Species
2. Specify
3. Special
4. Specific
5. Speaker

- Ans
- 1. 1, 5, 3, 2, 4
 - 2. 5, 3, 1, 4, 2
 - 3. 1, 5, 3, 4, 2
 - 4. 3, 1, 5, 4, 2

Question ID : 65497834829

Status : Answered

Chosen Option : 2

Q.18 Read the given statements and conclusions carefully. Assuming that the information given in the statements is true, even if it appears to be at variance with commonly known facts, decide which of the given conclusions logically follow(s) from the statements.

Statements:

1. All cities are villages.
2. No country is a city.

Conclusions:

- I. No country is a village.
- II. No village is a city.

- Ans
- 1. Neither conclusion I nor II follows
 - 2. Only conclusion I follows
 - 3. Only conclusion II follows
 - 4. Both the conclusions follow

Question ID : 65497834817

Status : Answered

Chosen Option : 1

Q.19 Six friends, P, Q, R, S, T and U, are sitting around a circular table, facing the centre of the table. P is second to right of S. Q is sitting to the immediate left of T. P is sitting between R and U. S is sitting to the immediate left of R. Who is sitting between P and S?

- Ans
- 1. T
 - 2. R
 - 3. U
 - 4. Q

Question ID : 65497834823

Status : Answered

Chosen Option : 2

Q.20 Six members (A, B, C, D, E, and F) of a family decide to have a family photo taken, and are sitting on a bed to be photographed. B is to the right of D, A is between F and C. E is standing at one of the ends and is second to the left of A. F always wants to stand next to D. Who is third from the left in the photograph?

- Ans
- 1. C
 - 2. F
 - 3. A
 - 4. D

Question ID : 65497834833

Status : Answered

Q.21 A is the husband of B, C is the mother-in-law of B, D is the father of A, E is the mother of D, F is the mother of C and G. If H is the father of D, then what is the relation of H with E?

- Ans**
- 1. Father-in-law
 - 2. Brother
 - 3. Husband
 - 4. Father

Question ID : 65497834840

Status : Answered

Chosen Option : 3

Q.22 Select the number from among the given options that can replace the question mark (?) in the following series.

20, 21, 25, 34, ?, 75

- Ans**
- 1. 45
 - 2. 51
 - 3. 55
 - 4. 50

Question ID : 65497834827

Status : Answered

Chosen Option : 4

Q.23 Select the option that is related to the third number in the same way as the second number is related to the first number.

10 : 109 :: 12 : ?

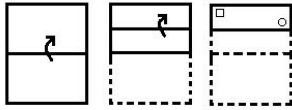
- Ans**
- 1. 129
 - 2. 136
 - 3. 139
 - 4. 132

Question ID : 65497834834

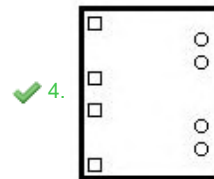
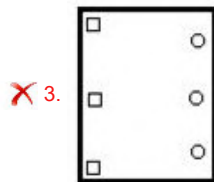
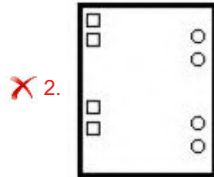
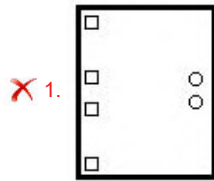
Status : Answered

Chosen Option : 2

Q.24 The sequence of folding a piece of paper and the manner in which the folded paper has been cut is shown in the following figures. How would this paper look when unfolded?



Ans



Question ID : 65497834820
Status : Answered
Chosen Option : 4

Q.25 Select the letter-cluster from among the given options that can replace the question mark (?) in the following series.

NIR, JGN, FEJ, ?

- Ans
- ✓ 1. BCF
 - ✗ 2. DDF
 - ✗ 3. CDE
 - ✗ 4. ADE

Question ID : 65497834821
Status : Answered
Chosen Option : 1

Section : Part B General Knowledge and General Awareness

Q.1 Which of the following dance forms is NOT a classical dance form?

- Ans
- ✗ 1. Kuchipudi
 - ✗ 2. Odissi
 - ✓ 3. Bhrakatha
 - ✗ 4. Manipuri

Question ID : 65497834854
Status : Answered

Q.2 What is the shallowest part of an ocean showing an average gradient of 1° or even less called?

- Ans
- 1. Continental slope
 - 2. Deep sea plain
 - 3. Continental shelf
 - 4. Oceanic trench

Question ID : 65497834841
Status : Answered
Chosen Option : 3

Q.3 Where did table tennis originate from?

- Ans
- 1. China
 - 2. England
 - 3. India
 - 4. Japan

Question ID : 65497834847
Status : Answered
Chosen Option : 4

Q.4 How much water carried by the Indus river system can India use under the Indus water treaty (1960)?

- Ans
- 1. 20%
 - 2. 15%
 - 3. 10%
 - 4. 25%

Question ID : 65497834853
Status : Answered
Chosen Option : 1

Q.5 Which of the following states hosts the annual Surajkund crafts fair?

- Ans
- 1. Uttar Pradesh
 - 2. Himachal Pradesh
 - 3. Haryana
 - 4. Uttarakhand

Question ID : 65497834857
Status : Answered
Chosen Option : 2

Q.6 Who among the following won the 'Gulbenkian Prize for Humanity' in 2020?

- Ans
- 1. Imran Khan
 - 2. Narendra Modi
 - 3. S Hussain Zaidi
 - 4. Greta Thunberg

Question ID : 65497834850
Status : Answered
Chosen Option : 2

Q.7 Having opened its Twitter account in _____, the Reserve Bank of India had more than 1 million followers on its official Twitter handle by November 2020.

- Ans
- 1. July 2016
 - 2. April 2014
 - 3. October 2018
 - 4. January 2012

Question ID : 65497834865
Status : Answered
Chosen Option : 4

Q.8 In August 2020, two coastal villages of which of the following states were declared 'Tsunami Ready' by the Intergovernmental Oceanographic Commission of UNESCO for their overall preparedness to face the calamity?

- Ans
- 1. Kerala
 - 2. Karnataka
 - 3. Gujarat
 - 4. Odisha

Question ID : 65497834846
Status : Answered
Chosen Option : 2

Q.9 What is NOT true about the livestock sector as per the Economic Survey of India 2020?

- Ans
- 1. Livestock sector has been growing at a Compound Annual Growth Rate (CAGR) of 7.9 per cent during last five years.
 - 2. Livestock has a potential to replace the agricultural sector.
 - 3. Livestock income has become an important secondary source of income for millions of rural families.
 - 4. It has assumed an important role in achieving the goal of doubling farmer's income.

Question ID : 65497834842
Status : Answered
Chosen Option : 1

Q.10 Who among the following was the court poet of Alauddin Khilji who wrote the famous poem 'Hasht-Bihisht'?

- Ans
- 1. Amir Khusrau
 - 2. Chand Bardai
 - 3. Agha Hasan Amanat
 - 4. Harisena

Question ID : 65497834843
Status : Answered
Chosen Option : 1

Q.11 Which among the following methods do most Indian households use for obtaining safe drinking water?

- Ans
- 1. Freezing
 - 2. Storing
 - 3. Recycling
 - 4. Boiling

Question ID : 65497834858
Status : Answered
Chosen Option : 3

Q.12 In which of the following oceans is Torres Strait located?

- Ans
- 1. Indian Ocean
 - 2. Arctic Ocean
 - 3. Atlantic Ocean
 - 4. Pacific Ocean

Question ID : 65497834849
Status : Answered
Chosen Option : 1

Q.13 Which of the following Indian sport shooters won the gold medal in the 10 metre air pistol event in 2019?

- Ans
- 1. Saurabh Chaudhary
 - 2. Apurvi Chandela
 - 3. Anjali Bhagwat
 - 4. Heena Sidhu

Question ID : 65497834855
Status : Answered
Chosen Option : 4

Q.14 Who among the following is the ex-officio chairperson of the National Disaster Management Authority?

- Ans
- 1. President
 - 2. Home Minister
 - 3. Prime Minister
 - 4. Vice President

Question ID : 65497834845
Status : Answered
Chosen Option : 3

Q.15 To whom was the 'I-League' trophy handed in 2019-20?

- Ans
- 1. United Sikkim
 - 2. East Bengal
 - 3. Mohun Bagan
 - 4. Dempo Goa

Question ID : 65497834851
Status : Answered
Chosen Option : 4

Q.16 When carbon dioxide is increased in the atmosphere, it leads to _____.

- Ans
- 1. global warming
 - 2. air pressure
 - 3. conservation
 - 4. rains

Question ID : 65497834859
Status : Answered
Chosen Option : 1

Q.17 What is the other name for Riboflavin?

- Ans 1. Vitamin B2
 2. Vitamin A
 3. Vitamin D
 4. Vitamin C

Question ID : 65497834852
Status : Answered
Chosen Option : 3

Q.18 Gandhiji organised a satyagraha among cotton mill workers at Ahmedabad in the year _____.

- Ans 1. 1921
 2. 1918
 3. 1929
 4. 1915

Question ID : 65497834862
Status : Answered
Chosen Option : 1

Q.19 The Taj Mahal is located in the city of Agra on the banks of the river _____.

- Ans 1. Chambal
 2. Ganga
 3. Yamuna
 4. Ghaghara

Question ID : 65497834848
Status : Answered
Chosen Option : 3

Q.20 According to the World Bank's Logistics Performance Index, among other countries India ranked _____ in 2018, up from the 54th rank in 2014.

- Ans 1. 44th
 2. 42nd
 3. 40th
 4. 52nd

Question ID : 65497834844
Status : Answered
Chosen Option : 2

Q.21 Prime Minister of India Narendra Modi and Prime Minister of Bhutan Lotay Tshering virtually launched _____ to allow Bhutanese cardholders to access RuPay network in India.

- Ans 1. RuPay International Card
 2. One Nation One Card
 3. RuPay card Phase I
 4. RuPay card Phase II

Question ID : 65497834856
Status : Answered
Chosen Option : 4

Q.22 Article _____ of the Constitution of India lays down that the State shall endeavour to secure for the citizens a uniform civil code throughout the territory of India.

- Ans** 1. 44
 2. 49
 3. 42
 4. 40

Question ID : 65497834864
Status : Answered
Chosen Option : 2

Q.23 Who is the author of the book 'An Era of Darkness: The British Empire in India'?

- Ans** 1. Shashi Tharoor
 2. Mira Nair
 3. Arun Jaitley
 4. Chetan Bhagat

Question ID : 65497834860
Status : Answered
Chosen Option : 2

Q.24 Which of the following agreements between India and Pakistan is also known as the 'Nehru-Liaquat Agreement'?

- Ans** 1. Agreement between India and Pakistan regarding resumption of rail traffic
 2. Agreement between India and Pakistan regarding security and rights of minorities
 3. Agreement between India and Pakistan relating to air services
 4. Agreement for avoidance of double taxation between India and Pakistan

Question ID : 65497834863
Status : Answered
Chosen Option : 2

Q.25 The value of all final goods and services produced within a country is called the:

- Ans** 1. GDP
 2. VAT
 3. IMR
 4. GST

Question ID : 65497834861
Status : Answered
Chosen Option : 1

Section : Part C Elementary Mathematics

Q.1 A man travelled a distance of 47 km in 6 hours. He travelled partly on foot at a speed of $6\frac{1}{2}$ km/h and the rest on bicycle at a speed of $8\frac{1}{2}$ km/h. The distance travelled (in km) on bicycle is:

- Ans** 1. 17
 2. 13
 3. 30
 4. 34

Question ID : 65497834872
Status : Not Answered
Chosen Option : --

Q.2 The simple interest on a certain sum of money at the rate of 7.5% p.a. for 8 years is ₹4,080. At what rate of interest can the same amount of interest be received on the same sum for 5 years?

- Ans**
- 1. 10.5%
 - 2. 12%
 - 3. 11%
 - 4. 9%

Question ID : 65497834874
Status : Answered
Chosen Option : 2

Q.3 A sum was put at simple interest at a certain rate for 2 years. If it had been put at 4% higher rate, it would have fetched ₹480 more. Find the sum.

- Ans**
- 1. ₹6,000
 - 2. ₹5,000
 - 3. ₹6,500
 - 4. ₹5,900

Question ID : 65497834884
Status : Answered
Chosen Option : 1

Q.4 The value of 2 of $5 - \frac{1}{2} - \left[4 \div 2 - \frac{1}{3} - \left\{ \frac{3}{4} - \left(5 - \frac{1}{2} - \frac{3}{4} \right) \right\} \right]$ is:

- Ans**
- 1. $\frac{1}{6}$
 - 2. $\frac{10}{3}$
 - 3. $\frac{7}{6}$
 - 4. $\frac{13}{2}$

Question ID : 65497834879
Status : Answered
Chosen Option : 2

Q.5 The value of $\{5 - 5 \div (10 - 12) \times 8 + 9\} \times 3 + 5 + 5 \times 5 \div 5$ of 5 is:

- Ans**
- 1. 57
 - 2. 114
 - 3. 102
 - 4. 108

Question ID : 65497834888
Status : Not Answered
Chosen Option : --

Q.6 A can complete 40% of a work in 6 days and B can complete $33\frac{1}{3}\%$ of the same work in 8 days. They work together for 8 days. C alone completes the remaining work in 4 days. A and C together will complete the same work in:

- Ans**
- 1. $13\frac{1}{8}$ days
 - 2. 12 days
 - 3. 9 days
 - 4. 10 days

Question ID : **65497834890**
Status : **Answered**
Chosen Option : **4**

Q.7 The length, breadth and height of a solid cuboidal box are in the ratio 7 : 5 : 3 and its total surface area is 11502 cm^2 . Its breadth is:

- Ans**
- 1. 27 cm
 - 2. 56 cm
 - 3. 81 cm
 - 4. 45 cm

Question ID : **65497834876**
Status : **Answered**
Chosen Option : **4**

Q.8 The average age of 26 students in a class is 15 years. If teacher's age is included in it, then the average will increase by one. What is the teacher's age (in years)?

- Ans**
- 1. 38
 - 2. 40
 - 3. 42
 - 4. 33

Question ID : **65497834882**
Status : **Answered**
Chosen Option : **3**

Q.9 Find the greatest number of four digits which is divisible by 14, 30 and 42.

- Ans**
- 1. 9780
 - 2. 9880
 - 3. 9870
 - 4. 9098

Question ID : **65497834881**
Status : **Answered**
Chosen Option : **3**

Q.10 A man sold 30 articles for ₹100 and gained 20%. The number of articles he bought for ₹100 was:

- Ans**
- 1. 28
 - 2. 24
 - 3. 36
 - 4. 32

Question ID : 65497834878
Status : Answered
Chosen Option : 3

Q.11 A money lender finds that due to a fall in the annual rate of interest from 10% to $8\frac{3}{4}\%$, his year's income diminishes by ₹84.50. Find his capital.

- Ans**
- 1. ₹7,660
 - 2. ₹6,940
 - 3. ₹6,760
 - 4. ₹7,460

Question ID : 65497834886
Status : Answered
Chosen Option : 3

Q.12 On selling an article for ₹984, Arun loses 18%. In order to gain 15%, he must sell it for:

- Ans**
- 1. ₹1,440
 - 2. ₹1,132
 - 3. ₹1,265
 - 4. ₹1,380

Question ID : 65497834889
Status : Answered
Chosen Option : 4

Q.13 Find the unknown value of 'x' in the proportion $(5x + 1) : 3 = (x + 3) : 7$

- Ans**
- 1. 1/8
 - 2. 1/14
 - 3. 1/17
 - 4. 1/16

Question ID : 65497834875
Status : Answered
Chosen Option : 4

Q.14 Jagat Singh sold an article for ₹6,000 and incurred a loss. Had he sold it for ₹7,400, his profit would have been $\frac{2}{3}$ of the amount of loss that he incurred. At what price should he sell it to gain 25% profit?

- Ans**
- 1. ₹8,550
 - 2. ₹7,500
 - 3. ₹8,500
 - 4. ₹7,550

Question ID : 65497834873
Status : Answered
Chosen Option : 2

Q.15 The ratio of three numbers is 3 : 5 : 4 and the sum of their squares is 11250. Find the sum of the numbers.

- Ans**
- 1. 180
 - 2. 150
 - 3. 225
 - 4. 165

Question ID : 65497834883
Status : Answered
Chosen Option : 1

Q.16 A car is moving at a uniform speed of 35 km/h. What is the time it takes to cover 140 km?

- Ans**
- 1. 300 minutes
 - 2. 240 minutes
 - 3. 250 minutes
 - 4. 200 minutes

Question ID : 65497834880
Status : Answered
Chosen Option : 2

Q.17 Two candidates are contesting in an election. All votes are valid votes. A candidate who gets 38% of votes is rejected by 28,800 votes. The total number of votes polled is:

- Ans**
- 1. 1,15,000
 - 2. 1,50,000
 - 3. 1,32,500
 - 4. 1,20,000

Question ID : 65497834870
Status : Answered
Chosen Option : 4

Q.18 The average age of $66\frac{2}{3}\%$ of the number of children in a group is 13 years. The average age of all the children in the group is 14.5 years. What is the average age (in years) of the remaining children?

- Ans**
- 1. 16.5
 - 2. 15
 - 3. 13.5
 - 4. 17.5

Question ID : 65497834868
Status : Answered
Chosen Option : 4

Q.19 If decreasing 90 by $k\%$ gives the same result as increasing 60 by $k\%$, then $k\%$ of 120 is how much per cent of $[(k+20)\%$ of 150]?

- Ans**
- 1. 76.42
 - 2. 40
 - 3. 60
 - 4. 45

Question ID : 65497834867
Status : Answered
Chosen Option : 2

Q.20 After getting two successive discounts, Seema got a shirt at ₹153, for which the marked price was ₹200. If the second discount was 15%, the first discount was:

- Ans**
- 1. 20%
 - 2. 25%
 - 3. 10%
 - 4. 15%

Question ID : 65497834877
Status : Answered
Chosen Option : 4

Q.21 If the surface areas of two spheres are in the ratio of 4 : 25, then find the ratio of their volumes.

- Ans**
- 1. 5 : 2
 - 2. 125 : 8
 - 3. 8 : 125
 - 4. 4 : 25

Question ID : 65497834887
Status : Answered
Chosen Option : 3

Q.22 A can complete 25% of the work in 4 days, B can complete 50% of the same work in 12 days and C can complete the same work in 32 days. They started working together but C left after 4 days of the start and A left 6 days before the completion of the work. In how many days was the work completed?

- Ans**
- 1. 10 days
 - 2. 12 days
 - 3. 8 days
 - 4. 14 days

Question ID : 65497834871
Status : Answered
Chosen Option : 1

Q.23 A number is three times another number and their HCF is 8. What is the sum of the squares of the numbers?

- Ans**
- 1. 640
 - 2. 512
 - 3. 1024
 - 4. 1000

Question ID : 65497834866
Status : Answered
Chosen Option : 2

Q.24 The sum of three numbers is 118. If the ratio of the first number to the second number is 3 : 4 and that of the second number to the third number is 5 : 6. Find the third number.

- Ans**
- 1. 30
 - 2. 58
 - 3. 48
 - 4. 40

Question ID : 65497834885
Status : Answered
Chosen Option : 3

Q.25 An article was sold for ₹1,215 after giving a discount of 19%. If a discount of 17.5% is given, then for how much (in ₹) should the article be sold?

- Ans**
- 1. 1,527.30
 - 2. 1,327.50
 - 3. 1,237.50
 - 4. 1,723.50

Question ID : 65497834869
Status : Answered
Chosen Option : 3

Q.1 The following sentence has been split into four segments. Identify the segment that contains a grammatical error.

Did you forgot / to post / the letter / that I gave you?

- Ans
- 1. the letter
 - 2. to post
 - 3. Did you forgot
 - 4. that I gave you

Question ID : 65497834908
Status : Answered
Chosen Option : 3

Q.2 Select the INCORRECTLY spelt word.

- Ans
- 1. Glich
 - 2. Glove
 - 3. Glade
 - 4. Gleam

Question ID : 65497834904
Status : Answered
Chosen Option : 1

Q.3 Select the INCORRECTLY spelt word.

- Ans
- 1. Guarantee
 - 2. Discipline
 - 3. Appreciate
 - 4. Guidance

Question ID : 65497834905
Status : Answered
Chosen Option : 2

Q.4 Select the most appropriate option that can substitute the underlined segment in the given sentence. If there is no need to substitute it, select 'No substitution required'.

There are still some sugar in the bowl.

- Ans
- 1. is still some sugar
 - 2. are still little sugar
 - 3. No substitution required
 - 4. is still few sugar

Question ID : 65497834897
Status : Answered
Chosen Option : 3

Q.5 Select the option that can be used as a one-word substitute for the given group of words.

A collection of sticks

- Ans** 1. Bundle
 2. Bevy
 3. Brood
 4. Bale

Question ID : 65497834910
Status : Answered
Chosen Option : 1

Q.6 Select the most appropriate option to fill in the blank.

It is believed that physical exercise is _____ for creating a balance between the body and the mind.

- Ans** 1. essential
 2. forceful
 3. demanding
 4. increased

Question ID : 65497834906
Status : Answered
Chosen Option : 1

Q.7 Select the most appropriate ANTONYM of the given word.

Gallant

- Ans** 1. Courageous
 2. Cowardly
 3. Heroic
 4. Valiant

Question ID : 65497834902
Status : Answered
Chosen Option : 2

Q.8 Select the most appropriate option that can substitute the underlined segment in the given sentence. If there is no need to substitute it, select 'No substitution required'.

Fred and Andrew were training for the Asian games.

- Ans** 1. is training for
 2. is being training for
 3. No substitution required
 4. were being training for

Question ID : 65497834901
Status : Answered
Chosen Option : 3

Q.9 Select the most appropriate SYNONYM of the given word.

Disrupt

- Ans 1. Disturb
 2. Disgrace
 3. Disagree
 4. Discuss

Question ID : 65497834909
Status : Answered
Chosen Option : 4

Q.10 Select the most appropriate option to fill in the blank.

The novel presents a theme of betrayal in a _____ manner.

- Ans 1. harmful
 2. tableful
 3. fruitful
 4. skilful

Question ID : 65497834895
Status : Answered
Chosen Option : 1

Q.11 Select the most appropriate option that can substitute the underlined segment in the given sentence. If there is no need to substitute it, select 'No substitution required'.

It didn't dawn on me until much later that he doesn't like me.

- Ans 1. till late
 2. until late
 3. until much after
 4. No substitution required

Question ID : 65497834907
Status : Not Attempted and Marked For Review
Chosen Option : --

Q.12 Select the most appropriate meaning of the given idiom.

A cold fish

- Ans 1. An unemotional person
 2. A nervous person
 3. A boring person
 4. A sensitive person

Question ID : 65497834898
Status : Answered
Chosen Option : 1

Q.13 Select the option that can be used as a one-word substitute for the given group of words.

A system of government in which most of the important decisions are taken by state officials rather than by elected representatives.

- Ans
- 1. Aristocracy
 - 2. Monarchy
 - 3. Democracy
 - 4. Bureaucracy

Question ID : 65497834903
Status : Answered
Chosen Option : 4

Q.14 Parts of the given sentence have been given as options. One of them contains a grammatical error. Select the option that has the error.

India has produce many well-known scientists who have received accolades all over the world.

- Ans
- 1. who have received
 - 2. India has produce
 - 3. well-known scientists
 - 4. all over the world

Question ID : 65497834900
Status : Answered
Chosen Option : 2

Q.15 Select the most appropriate synonym of the given word.

Coarse

- Ans
- 1. Happy
 - 2. Kind
 - 3. Polite
 - 4. Crude

Question ID : 65497834892
Status : Answered
Chosen Option : 4

Q.16 Select the option that can be used as a one-word substitute for the given group of words.

A building where monks live as a community

- Ans
- 1. Monastery
 - 2. Villa
 - 3. Cottage
 - 4. Condo

Question ID : 65497834894
Status : Answered
Chosen Option : 1

Q.17 Select the most appropriate meaning of the given idiom.

Vanish into thin air

- Ans
- 1. Dilute entirely
 - 2. Disappear completely
 - 3. Postpone finally
 - 4. Mix permanently

Question ID : 65497834893

Status : Answered

Chosen Option : 3

Q.18 Select the most appropriate ANTONYM of the given word.

Hearty

- Ans
- 1. Aloof
 - 2. Cordial
 - 3. Warm
 - 4. Robust

Question ID : 65497834896

Status : Not Answered

Chosen Option : --

Q.19 Select the most appropriate option to fill in the blank.

_____ of money prevented me from purchasing the house.

- Ans
- 1. Short
 - 2. Less
 - 3. Limit
 - 4. Lack

Question ID : 65497834899

Status : Answered

Chosen Option : 4

Q.20 The following sentence has been divided into parts. One of them may contain an error. Select the part that contains the error from the given options. If you don't find any error, select 'No error' as your answer.

I wants / to borrow your bicycle / for a day.

- Ans
- 1. for a day
 - 2. to borrow your bicycle
 - 3. No error
 - 4. I wants

Question ID : 65497834891

Status : Answered

Chosen Option : 4

Comprehension:

In the following passage, some words have been deleted. Read the passage carefully and select the most appropriate option to fill in each blank.

Jog Falls is one of the highest waterfalls in India. It is made by Sharavati river (1)_____ through the Western Ghats. It is surrounded (2)_____ a beautiful tropical forest. During summer, there is not (3)_____ water in the river but during monsoons, (4)_____ river is swollen with water and the Falls create a (5)_____ spectacle.

SubQuestion No : 21

Q.21 Select the most appropriate option to fill in blank no.1.

- Ans 1. flowed
 2. flow
 3. flowing
 4. flows

Question ID : 65497834912

Status : Answered

Chosen Option : 3

Comprehension:

In the following passage, some words have been deleted. Read the passage carefully and select the most appropriate option to fill in each blank.

Jog Falls is one of the highest waterfalls in India. It is made by Sharavati river (1)_____ through the Western Ghats. It is surrounded (2)_____ a beautiful tropical forest. During summer, there is not (3)_____ water in the river but during monsoons, (4)_____ river is swollen with water and the Falls create a (5)_____ spectacle.

SubQuestion No : 22

Q.22 Select the most appropriate option to fill in blank no.2.

- Ans 1. from
 2. by
 3. with
 4. through

Question ID : 65497834913

Status : Answered

Chosen Option : 2

Comprehension:

In the following passage, some words have been deleted. Read the passage carefully and select the most appropriate option to fill in each blank.

Jog Falls is one of the highest waterfalls in India. It is made by Sharavati river (1)_____ through the Western Ghats. It is surrounded (2)_____ a beautiful tropical forest. During summer, there is not (3)_____ water in the river but during monsoons, (4)_____ river is swollen with water and the Falls create a (5)_____ spectacle.

SubQuestion No : 23

Q.23 Select the most appropriate option to fill in blank no.3.

- Ans 1. many
 2. most
 3. more
 4. much

Question ID : 65497834914

Status : Answered

Chosen Option : 4

Comprehension:

In the following passage, some words have been deleted. Read the passage carefully and select the most appropriate option to fill in each blank.

Jog Falls is one of the highest waterfalls in India. It is made by Sharavati river (1)_____ through the Western Ghats. It is surrounded (2)_____ a beautiful tropical forest. During summer, there is not (3)_____ water in the river but during monsoons, (4)_____ river is swollen with water and the Falls create a (5)_____ spectacle.

SubQuestion No : 24

Q.24 Select the most appropriate option to fill in blank no.4.

- Ans 1. one
 2. the
 3. an
 4. a

Question ID : 65497834915

Status : Answered

Chosen Option : 2

Comprehension:

In the following passage, some words have been deleted. Read the passage carefully and select the most appropriate option to fill in each blank.

Jog Falls is one of the highest waterfalls in India. It is made by Sharavati river (1)_____ through the Western Ghats. It is surrounded (2)_____ a beautiful tropical forest. During summer, there is not (3)_____ water in the river but during monsoons, (4)_____ river is swollen with water and the Falls create a (5)_____ spectacle.

SubQuestion No : 25

Q.25 Select the most appropriate option to fill in blank no.5.

- Ans 1. different
 2. peculiar
 3. amazing
 4. fantastic

Question ID : 65497834916

Status : Answered

Chosen Option : 3

Section : Part D Hindi

Q.1 'पर्वत के ऊपर की समतल भूमि' वाक्यांश के लिए एक शब्द होगा-

- Ans 1. अधित्यका
 2. गिरि
 3. उपत्यका
 4. पठार

Question ID : 65497834935

Status : Not Answered

Chosen Option : --

Q.2 दिए गए शब्द का विलोम चुनें।

मौन

- Ans
- 1. चुप
 - 2. मौलिक
 - 3. वाचाल
 - 4. शात

Question ID : 65497834927
Status : Not Answered
Chosen Option : --

Q.3 दिए गए चार विकल्पों में से, उस विकल्प का चयन करें जो नीचे दिए मुहावरे का अर्थ व्यक्त करता है।

आँखों में धूल झोकना

- Ans
- 1. धोखा देना
 - 2. ढाढ़स बधाना
 - 3. आँख फोड़ना
 - 4. आदर देना

Question ID : 65497834928
Status : Not Answered
Chosen Option : --

Q.4 दिए गए शब्द के समानार्थी शब्द का चयन करें।

कमल

- Ans
- 1. अम्बुज
 - 2. कुसुमाकर
 - 3. सैन्धव
 - 4. कल्पतरु

Question ID : 65497834926
Status : Not Answered
Chosen Option : --

Q.5 'ताप' का विलोम शब्द होगा-

- Ans
- 1. उष्ण
 - 2. पाप
 - 3. शीत
 - 4. सताप

Question ID : 65497834934
Status : Not Answered
Chosen Option : --

Q.6 दिये गये वाक्य के किस भाग में त्रुटि है?

अभी ही वह यहाँ से बाहर गया है।

- Ans
- 1. वह यहाँ
 - 2. गया है।
 - 3. अभी ही
 - 4. से बाहर

Question ID : 65497834933
Status : Not Answered
Chosen Option : --

Q.7 रिक्त स्थान को भरने के लिए सबसे उपयुक्त शब्द का चयन करें।

मेरे पिताजी ने यह _____ लिखी है।

- Ans
- 1. नाटक
 - 2. कहानी
 - 3. उपन्यास
 - 4. सस्करण

Question ID : 65497834919
Status : Not Answered
Chosen Option : --

Q.8 दिए गए वाक्य में रेखांकित खंड को प्रतिस्थापित करने के लिए सबसे उपयुक्त विकल्प का चयन करें।
यदि इसे प्रतिस्थापित करने की आवश्यकता नहीं है, तो विकल्प 'किसी बदलाव की आवश्यकता नहीं है'
का चयन करें।

सतुष्ट होने के कारण उसने कभी शिकायत नहीं की।

- Ans
- 1. उसने कभी शिकायत नहीं करा।
 - 2. उसने कभी शिकायत नहीं किये।
 - 3. उसने कभी शिकायतें नहीं किये।
 - 4. किसी बदलाव की आवश्यकता नहीं है।

Question ID : 65497834936
Status : Not Answered
Chosen Option : --

Q.9 दिए गए वाक्य का वो भाग ज्ञात करें जिसमें कोई त्रुटि है। यदि कोई त्रुटि नहीं है, तो 'कोई त्रुटि नहीं है'
चुनें।

बिल के भुगतान (1)\ न करने पर तुम्हें (2)\ माल वापस करना होगा। (3)\ कोई त्रुटि नहीं है (4)

- Ans
- 1. 1
 - 2. 3
 - 3. 2
 - 4. 4

Question ID : 65497834922
Status : Not Answered
Chosen Option : --

Q.10 नीचे दिए वाक्यांश के लिए एक शब्द दिए गए विकल्पों में से चुनिए।

जिसका अपकार किया गया हो।

- Ans
- 1. उपकार
 - 2. अपकृत
 - 3. अपकार
 - 4. उपकृत

Question ID : 65497834929
Status : Not Answered
Chosen Option : --

Q.11 निम्नलिखित प्रश्न में, दिए गए चार विकल्पों में से, उस विकल्प का चयन करें जो मुहावरे का अर्थ व्यक्त करता है।

देवता कूच कर जाना

- Ans
- 1. दूर चले जाना
 - 2. घबरा जाना
 - 3. दुर्गति होना
 - 4. होश में न रहना

Question ID : 65497834924
Status : Not Answered
Chosen Option : --

Q.12 सही वर्तनी वाले शब्द का चयन करें।

- Ans
- 1. पूजनीय
 - 2. पुज्यनिय
 - 3. पुजनीय
 - 4. पूज्यनीय

Question ID : 65497834930
Status : Not Answered
Chosen Option : --

Q.13 दिए गए वाक्य में रेखांकित खंड को प्रतिस्थापित करने के लिए सबसे उपयुक्त विकल्प का चयन करें। यदि इसे प्रतिस्थापित करने की आवश्यकता नहीं है, तो विकल्प 'किसी बदलाव की आवश्यकता नहीं है' का चयन करें।

उसका दुर्भाग्य था और इसलिए वह परीक्षा में बैठ न सके।

- Ans
- 1. इसलिए वह परीक्षा में बैठ न सका।
 - 2. इसलिए वह परीक्षा में बैठे न सका।
 - 3. इसलिए वह परीक्षाओं में बैठ न सके।
 - 4. किसी बदलाव की आवश्यकता नहीं है।

Question ID : 65497834921
Status : Not Answered
Chosen Option : --

Q.14 सही वर्तनी वाले शब्द का चयन करें।

- Ans 1. सौहार्द
 2. सौहार्द्र
 3. सोहाद्र
 4. सैहार्द

Question ID : 65497834931

Status : Not Answered

Chosen Option : --

Q.15 दिए गए वाक्य का वह भाग ज्ञात करें जिसमें कोई त्रुटि है। यदि कोई त्रुटि नहीं है, तो 'कोई त्रुटि नहीं है' चुनें।

पिताजी को (1)/ मुझे कुछ (2)/ रुपये दिये (3)/ कोई त्रुटि नहीं है (4)

- Ans 1. 3
 2. 4
 3. 2
 4. 1

Question ID : 65497834925

Status : Not Answered

Chosen Option : --

Q.16 रिक्त स्थान को भरने के लिए सबसे उपयुक्त शब्द का चयन कीजिए।

नई वस्तु की खोज को _____ कहते हैं।

- Ans 1. गवेषणा
 2. सशोधन
 3. खोज
 4. आविष्कार

Question ID : 65497834918

Status : Not Answered

Chosen Option : --

Q.17 इस वाक्यांश के लिए एक सार्थक शब्द दीजिए।

किसी पर विजय पाने की इच्छा रखने वाला

- Ans 1. जिज्ञासा
 2. जिगीषु
 3. जिजीविषा
 4. जिगीषा

Question ID : 65497834917

Status : Not Answered

Chosen Option : --

Q.18 दिए गए वाक्य में रेखांकित खंड को प्रतिस्थापित करने के लिए सबसे उपयुक्त विकल्प का चयन करें। यदि इसे प्रतिस्थापित करने की आवश्यकता नहीं है, तो विकल्प 'किसी बदलाव की आवश्यकता नहीं है' का चयन करें।

रावण वध के दिन अनेक लोग ने रामलीला देखी।

- Ans
- 1. अनेक लोगो ने रामलीला देखें।
 - 2. अनेक लोगो ने रामलीला देखी।
 - 3. अनेक लोग ने रामलीला देखा।
 - 4. किसी बदलाव की आवश्यकता नहीं है।

Question ID : 65497834920

Status : Not Answered

Chosen Option : --

Q.19 दिए गए शब्द के समानार्थी शब्द का चयन करें।

पुष्प

- Ans
- 1. जलजात
 - 2. परिमल
 - 3. प्रसून
 - 4. पल्लव

Question ID : 65497834923

Status : Not Answered

Chosen Option : --

Q.20 रिक्त स्थान को भरने के लिए सबसे उपयुक्त शब्द का चयन करें।

मैंने अपने भाई को _____ भेजा कि रविवार को हमसे मिलने आना।

- Ans
- 1. सवाद
 - 2. सदेश
 - 3. समाचार
 - 4. सूचना

Question ID : 65497834932

Status : Not Answered

Chosen Option : --

Comprehension:

श्रद्धा का मूल तत्व है- दूसरे का महत्व स्वीकार। अतः जिसकी (1) _____ दृष्टि अपने से आगे नहीं जा सकती अथवा (2) _____ के कारण जिन्हें अपनी ही बड़ाई के अनुभव की लत लग गई है उनकी इतनी समाई नहीं कि वे श्रद्धा ऐसे पवित्र भाव को (3) _____ करें। स्वार्थियो और अभिमानियो के (4) _____ में श्रद्धा नहीं टिक सकती। उनका अतःकरण सकुचित और (5) _____ होता है कि वह दूसरो के कृति का यथार्थ मूल्य नहीं परख सकते।

निम्न प्रश्नों के उत्तर उपरोक्त गद्यांश के आधार पर दीजिए।

SubQuestion No : 21

Q.21 गद्यांश के रिक्त स्थान (1) के लिए सर्वाधिक उपयुक्त शब्द होगा-

- Ans
- 1. परमार्थबद्ध
 - 2. मुक्त
 - 3. स्वार्थबद्ध
 - 4. विस्तृत

Question ID : 65497834938

Status : Not Answered

Chosen Option : --

Comprehension:

श्रद्धा का मूल तत्व है- दूसरे का महत्व स्वीकार। अतः जिसकी (1) _____ दृष्टि अपने से आगे नहीं जा सकती अथवा (2) _____ के कारण जिन्हें अपनी ही बड़ाई के अनुभव की लत लग गई है उनकी इतनी समाई नहीं कि वे श्रद्धा ऐसे पवित्र भाव को (3) _____ करें। स्वार्थियो और अभिमानियो के (4) _____ में श्रद्धा नहीं टिक सकती। उनका अतःकरण सकुचित और (5) _____ होता है कि वह दूसरो के कृति का यथार्थ मूल्य नहीं परख सकते।

निम्न प्रश्नो के उत्तर उपरोक्त गद्यांश के आधार पर दीजिए।

SubQuestion No : 22

Q.22 गद्यांश के रिक्त स्थान (2) के लिए सर्वाधिक उपयुक्त शब्द होगा-

- Ans
- 1. बलिदान
 - 2. सम्मान
 - 3. अपमान
 - 4. अभिमान

Question ID : 65497834939

Status : Not Answered

Chosen Option : --

Comprehension:

श्रद्धा का मूल तत्व है- दूसरे का महत्व स्वीकार। अतः जिसकी (1) _____ दृष्टि अपने से आगे नहीं जा सकती अथवा (2) _____ के कारण जिन्हें अपनी ही बड़ाई के अनुभव की लत लग गई है उनकी इतनी समाई नहीं कि वे श्रद्धा ऐसे पवित्र भाव को (3) _____ करें। स्वार्थियो और अभिमानियो के (4) _____ में श्रद्धा नहीं टिक सकती। उनका अतःकरण सकुचित और (5) _____ होता है कि वह दूसरो के कृति का यथार्थ मूल्य नहीं परख सकते।

निम्न प्रश्नो के उत्तर उपरोक्त गद्यांश के आधार पर दीजिए।

SubQuestion No : 23

Q.23 गद्यांश के रिक्त स्थान (3) के लिए सर्वाधिक उपयुक्त शब्द होगा-

- Ans
- 1. धारण
 - 2. चारण
 - 3. अनुकरण
 - 4. अनुसरण

Question ID : 65497834940

Status : Not Answered

Chosen Option : --

Comprehension:

श्रद्धा का मूल तत्व है- दूसरे का महत्व स्वीकार। अतः जिसकी (1) _____ दृष्टि अपने से आगे नहीं जा सकती अथवा (2) _____ के कारण जिन्हें अपनी ही बड़ाई के अनुभव की लत लग गई है उनकी इतनी समाई नहीं कि वे श्रद्धा ऐसे पवित्र भाव को (3) _____ करें। स्वार्थियो और अभिमानियो के (4) _____ में श्रद्धा नहीं टिक सकती। उनका अतःकरण सकुचित और (5) _____ होता है कि वह दूसरो के कृति का यथार्थ मूल्य नहीं परख सकते।

निम्न प्रश्नो के उत्तर उपरोक्त गद्यांश के आधार पर दीजिए।

SubQuestion No : 24

Q.24 गद्यांश के रिक्त स्थान (4) के लिए सर्वाधिक उपयुक्त शब्द होगा-

- Ans
- 1. बुद्धि
 - 2. शरीर
 - 3. हृदय
 - 4. मस्तिष्क

Question ID : 65497834941

Status : Not Answered

Chosen Option : --

Comprehension:

श्रद्धा का मूल तत्व है- दूसरे का महत्व स्वीकार। अतः जिसकी (1) _____ दृष्टि अपने से आगे नहीं जा सकती अथवा (2) _____ के कारण जिन्हें अपनी ही बड़ाई के अनुभव की लत लग गई है उनकी इतनी समाई नहीं कि वे श्रद्धा ऐसे पवित्र भाव को (3) _____ करें। स्वार्थियो और अभिमानियो के (4) _____ में श्रद्धा नहीं टिक सकती। उनका अतःकरण सकुचित और (5) _____ होता है कि वह दूसरो के कृति का यथार्थ मूल्य नहीं परख सकते।

निम्न प्रश्नो के उत्तर उपरोक्त गद्यांश के आधार पर दीजिए।

SubQuestion No : 25

Q.25 गद्यांश के रिक्त स्थान (5) के लिए सर्वाधिक उपयुक्त शब्द होगा-

- Ans**
- 1. विस्तृत
 - 2. पवित्र
 - 3. धवल
 - 4. मलिन

Question ID : 65497834942

Status : **Not Answered**

Chosen Option : --